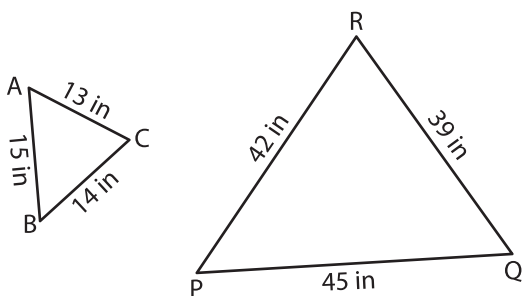


Name : _____

Similarity Statements

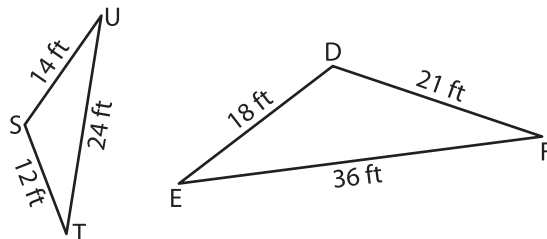
Complete each similarity statement.

1)



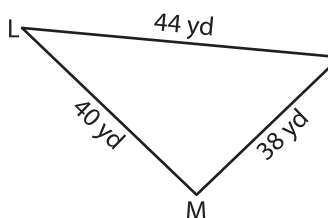
$\triangle ABC \sim$ _____

2)

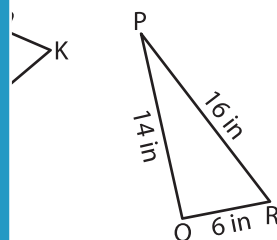


$\triangle DEF \sim$ _____

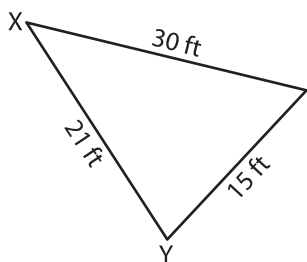
3)



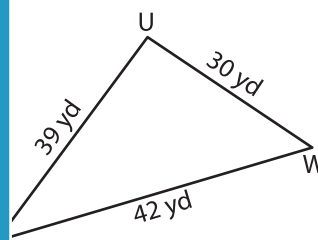
$\triangle LMN \sim$ _____



5)



$\triangle XYZ \sim$ _____



PREVIEW

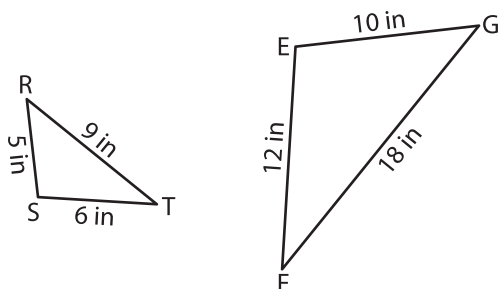
Gain complete access to the largest collection of worksheets in all subjects!

Members, please log in to download this worksheet.

Not a member? Please sign up to gain complete access.

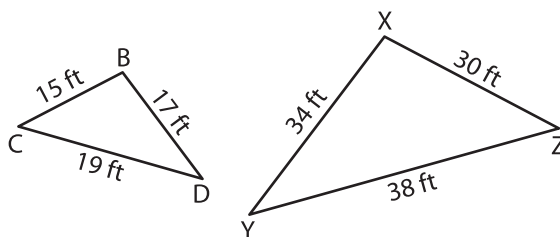
www.mathworksheets4kids.com

7)



$\triangle EFG \sim$ _____

8)



$\triangle BCD \sim$ _____