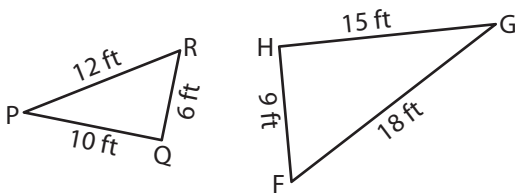


Name : _____

Similarity Statements

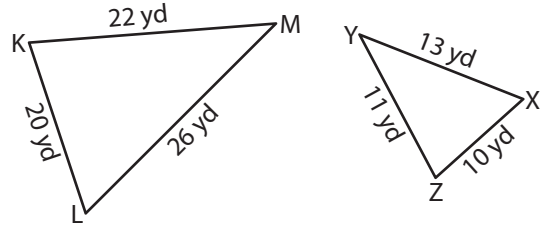
Complete each similarity statement.

1)



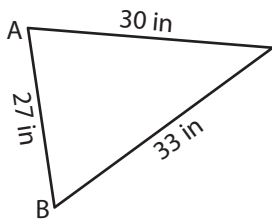
$\triangle PQR \sim$ _____

2)

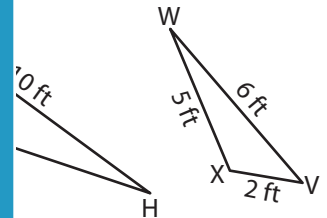


$\triangle XYZ \sim$ _____

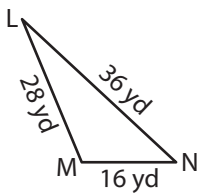
3)



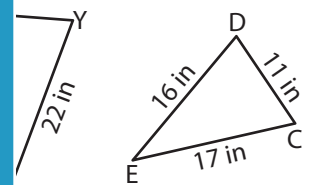
$\triangle ABC \sim$ _____



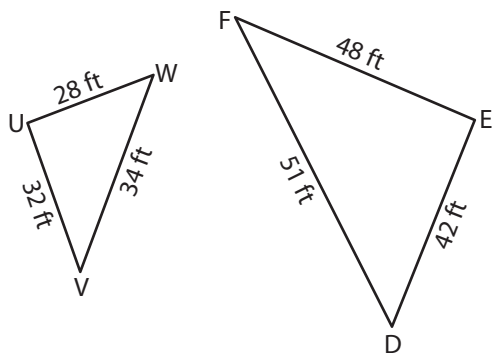
5)



$\triangle LMN \sim$ _____

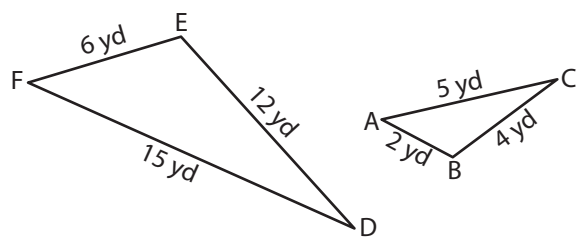


7)



$\triangle UVW \sim$ _____

8)



$\triangle DEF \sim$ _____

PREVIEW

Gain complete access to the largest collection of worksheets in all subjects!

Members, please log in to download this worksheet.

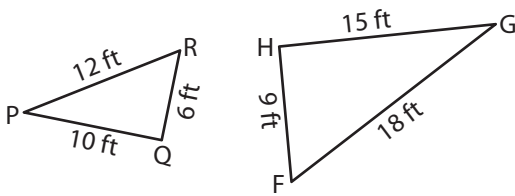
Not a member? Please sign up to gain complete access.

www.mathworksheets4kids.com

Similarity Statements

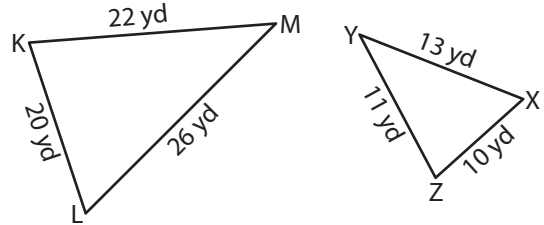
Complete each similarity statement.

1)



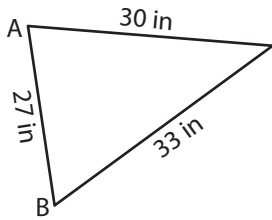
$\triangle PQR \sim \underline{\triangle GHF}$

2)

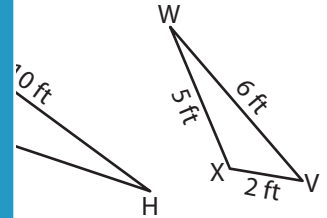


$\triangle XYZ \sim \underline{\triangle LMK}$

3)

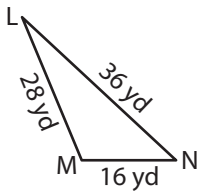


$\triangle ABC \sim \underline{\triangle XWV}$

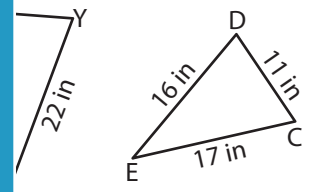


$\triangle XWV$

5)

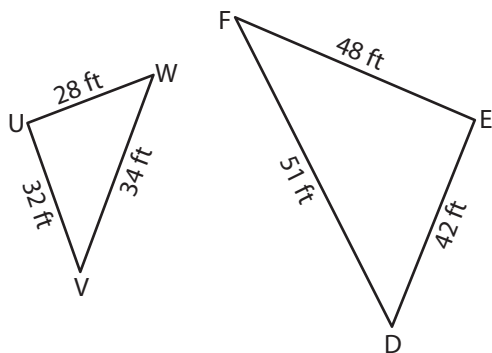


$\triangle LMN \sim \underline{\triangle EDC}$



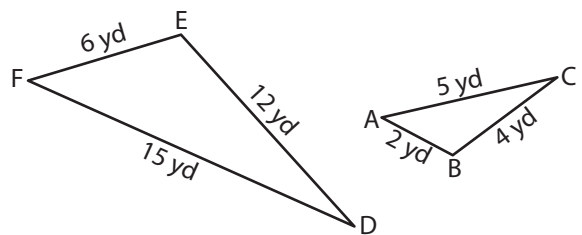
$\triangle EDC$

7)



$\triangle UVW \sim \underline{\triangle FED}$

8)



$\triangle DEF \sim \underline{\triangle CBA}$

PREVIEW

Gain complete access to the largest collection of worksheets in all subjects!

Members, please log in to download this worksheet.

Not a member? Please sign up to gain complete access.

www.mathworksheets4kids.com