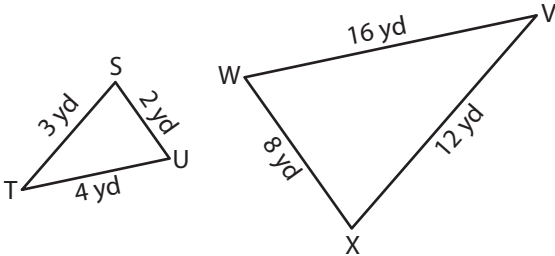


Name : \_\_\_\_\_

# Similarity Statements

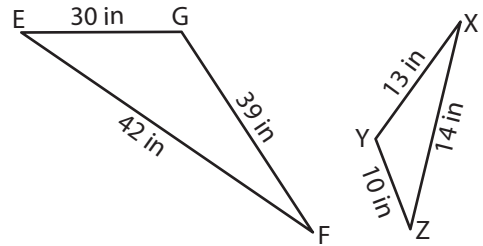
Complete each similarity statement.

1)



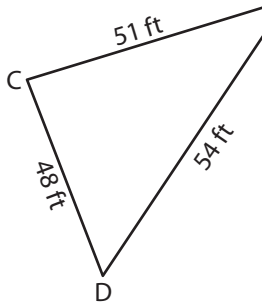
$\triangle ASTU \sim$  \_\_\_\_\_

2)

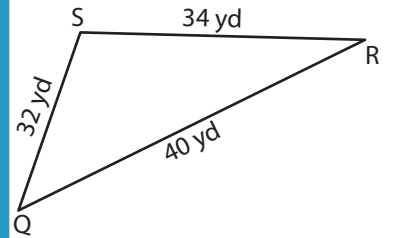


$\triangle EFG \sim$  \_\_\_\_\_

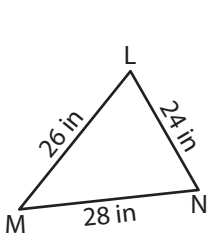
3)



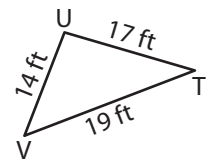
$\triangle PQR \sim$  \_\_\_\_\_



5)



$\triangle LMN \sim$  \_\_\_\_\_



**PREVIEW**

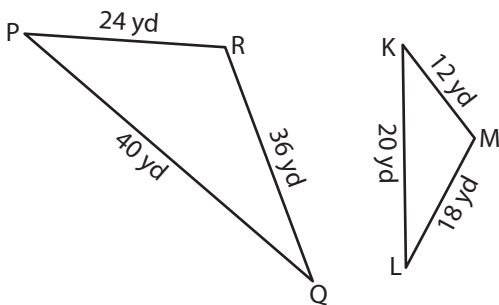
Gain complete access to the largest collection of worksheets in all subjects!

Members, please log in to download this worksheet.

Not a member? Please sign up to gain complete access.

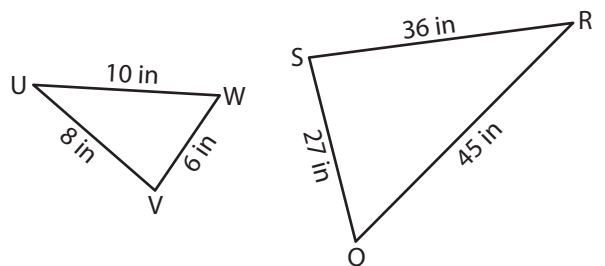
[www.mathworksheets4kids.com](http://www.mathworksheets4kids.com)

7)



$\triangle KLM \sim$  \_\_\_\_\_

8)

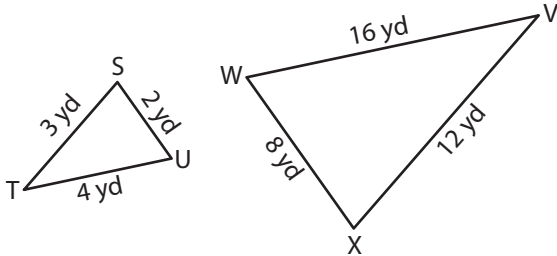


$\triangle UVW \sim$  \_\_\_\_\_

**Similarity Statements**

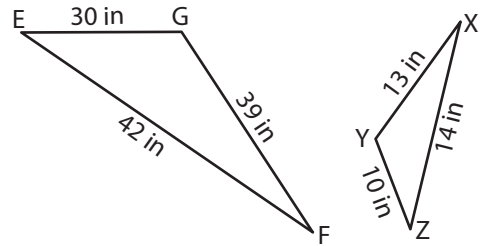
Complete each similarity statement.

1)



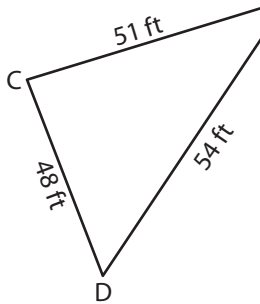
$\Delta STU \sim \underline{\Delta XVW}$

2)

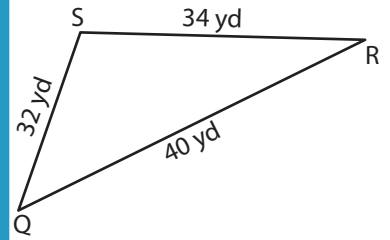


$\Delta EFG \sim \underline{\Delta ZXY}$

3)

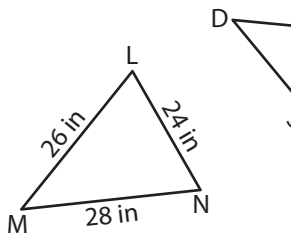


$\Delta PQR \sim \underline{\Delta QSR}$



$\Delta QSR$

5)

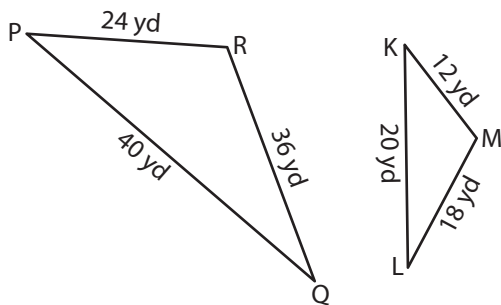


$\Delta LMN \sim \underline{\Delta VTU}$



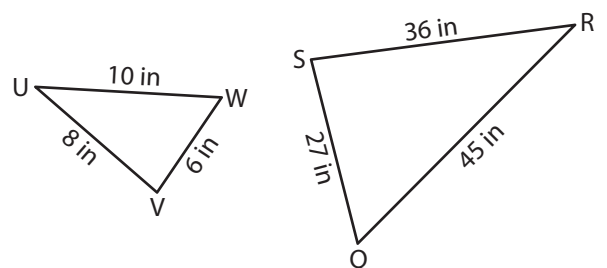
$\Delta VTU$

7)



$\Delta KLM \sim \underline{\Delta PQR}$

8)



$\Delta UVW \sim \underline{\Delta RSQ}$

**PREVIEW**

Gain complete access to the largest collection of worksheets in all subjects!

Members, please log in to download this worksheet.

Not a member? Please sign up to gain complete access.

[www.mathworksheets4kids.com](http://www.mathworksheets4kids.com)