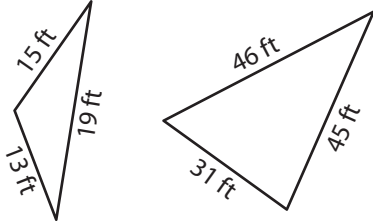


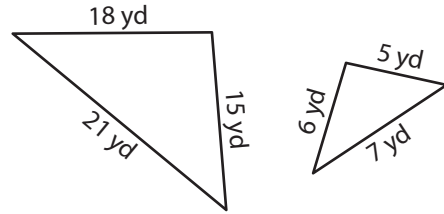
Similarity of Triangles

Write whether each pair of triangles are similar.

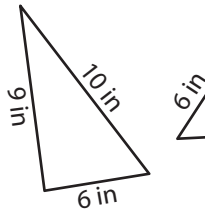
1)



2)



3)



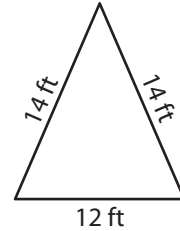
PREVIEW

Gain complete access to the largest collection of worksheets in all subjects!

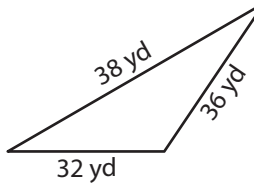
Members, please log in to download this worksheet.

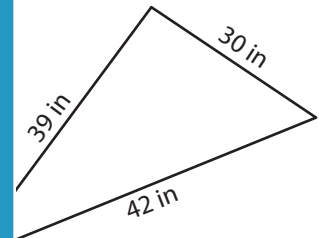
Not a member? Please sign up to gain complete access.

www.mathworksheets4kids.com

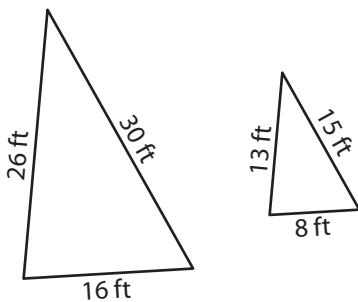


5)

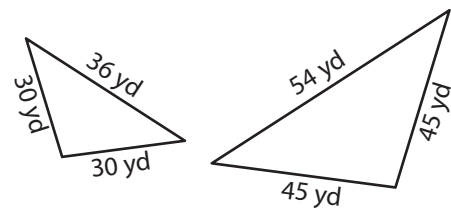




7)



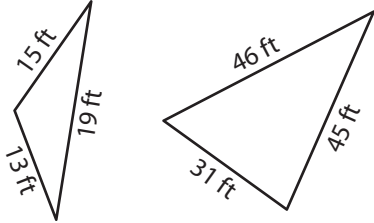
8)



Similarity of Triangles

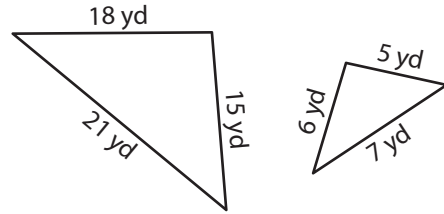
Write whether each pair of triangles are similar.

1)



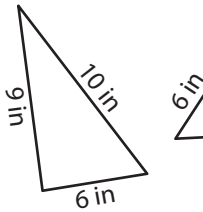
not similar

2)



similar

3)



not similar

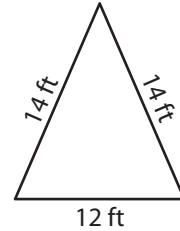
PREVIEW

Gain complete access to the largest collection of worksheets in all subjects!

Members, please log in to download this worksheet.

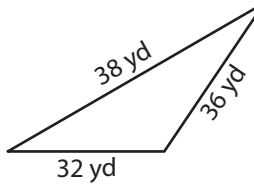
Not a member? Please sign up to gain complete access.

www.mathworksheets4kids.com



similar

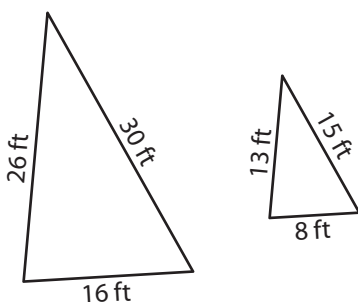
5)



not similar

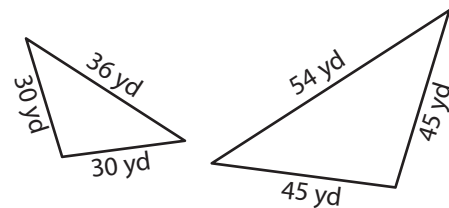
similar

7)



similar

8)



similar