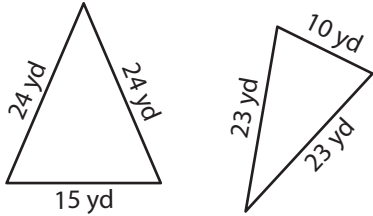


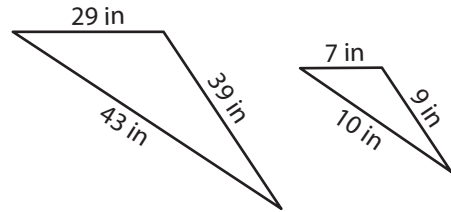
Similarity of Triangles

Write whether each pair of triangles are similar.

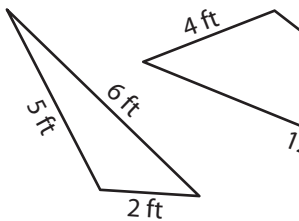
1)



2)



3)



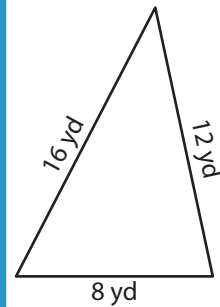
PREVIEW

Gain complete access to the largest collection of worksheets in all subjects!

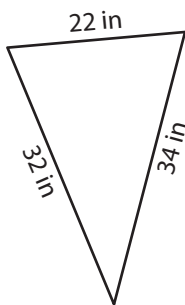
Members, please log in to download this worksheet.

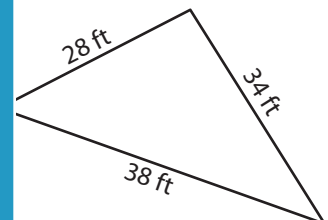
Not a member? Please sign up to gain complete access.

www.mathworksheets4kids.com

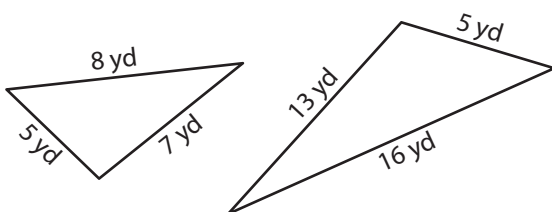


5)

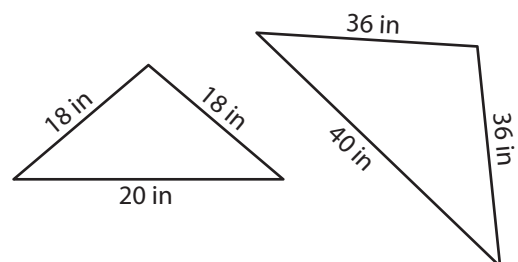




7)



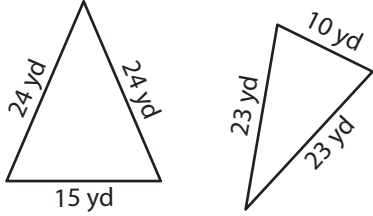
8)



Similarity of Triangles

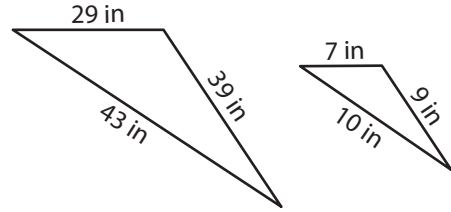
Write whether each pair of triangles are similar.

1)



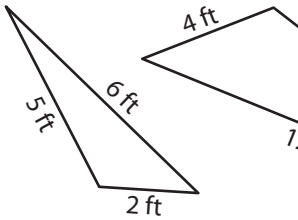
not similar

2)

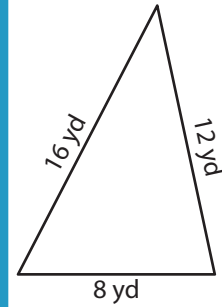


not similar

3)

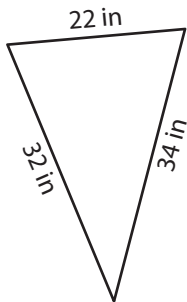


similar

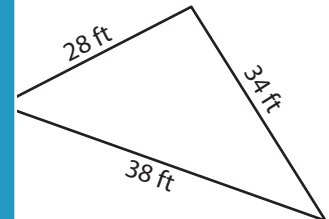


similar

5)



similar



similar

PREVIEW

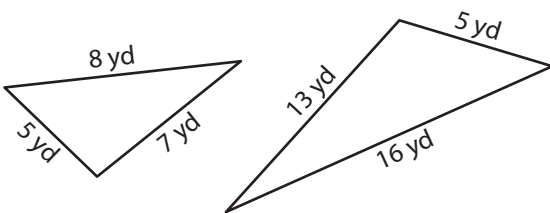
Gain complete access to the largest collection of worksheets in all subjects!

Members, please log in to download this worksheet.

Not a member? Please sign up to gain complete access.

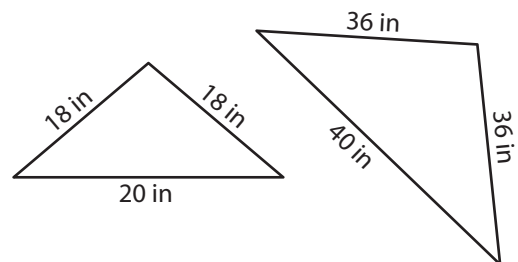
www.mathworksheets4kids.com

7)



not similar

8)



similar