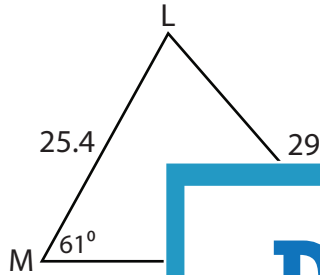


Missing Sides

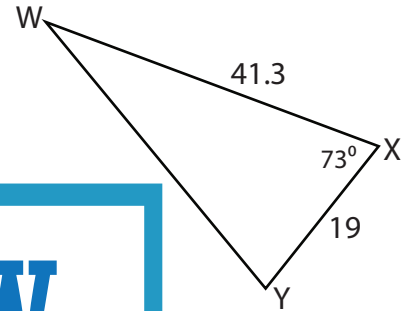
Find the measure of each indicated side. Round your answer to the nearest tenth.

1)

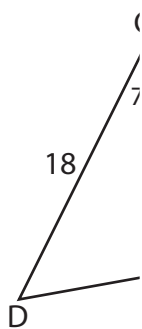


MN = _____

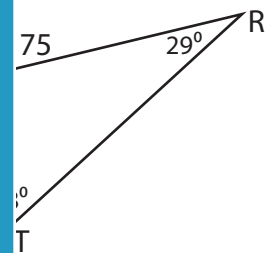
2)



3)



DE = _____



PREVIEW

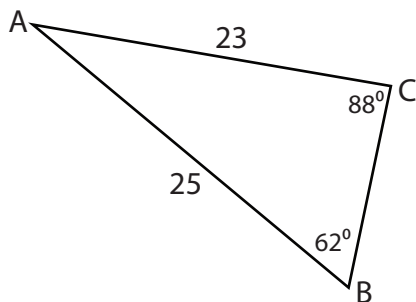
Gain complete access to the largest collection of worksheets in all subjects!

Members, please log in to download this worksheet.

Not a member? Please sign up to gain complete access.

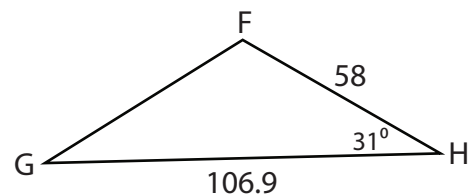
www.mathworksheets4kids.com

5)



BC = _____

6)

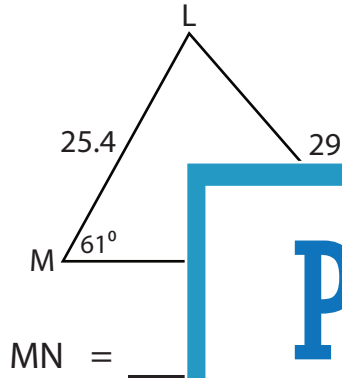


FG = _____

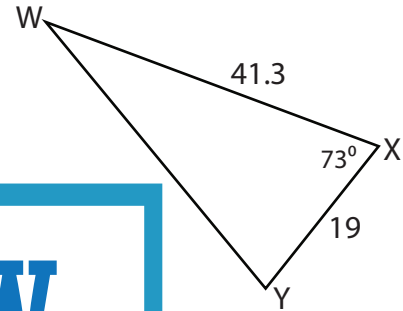
Missing Sides

Find the measure of each indicated side. Round your answer to the nearest tenth.

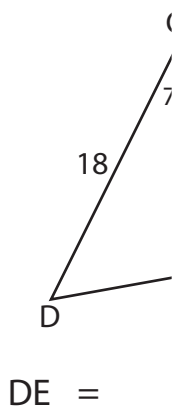
1)



2)

**40.1**

3)



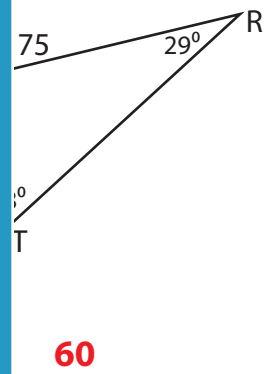
PREVIEW

Gain complete access to the largest collection of worksheets in all subjects!

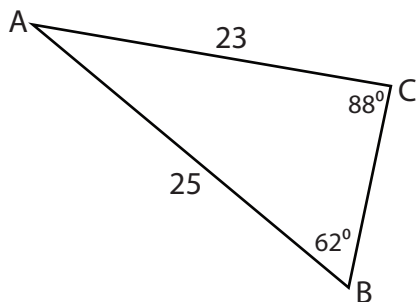
Members, please log in to download this worksheet.

Not a member? Please sign up to gain complete access.

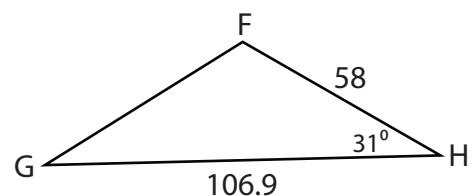
www.mathworksheets4kids.com

**60**

5)

**12.6**

6)

**64.5**