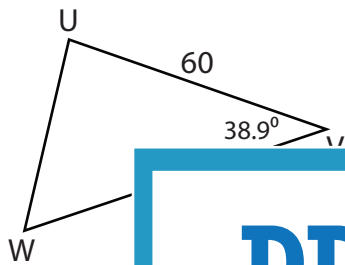


Missing Sides

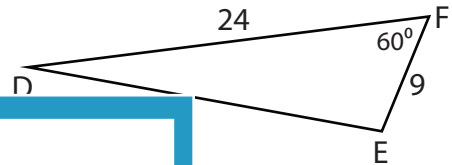
Find the measure of each indicated side. Round your answer to the nearest tenth.

1)



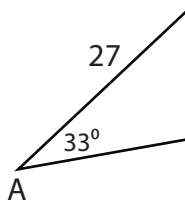
UW = _____

2)

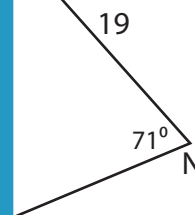


DE = _____

3)



BC = _____



MP = _____

PREVIEW

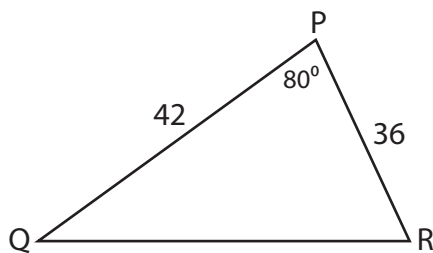
Gain complete access to the largest collection of worksheets in all subjects!

Members, please log in to download this worksheet.

Not a member? Please sign up to gain complete access.

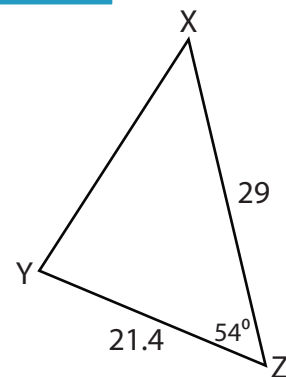
www.mathworksheets4kids.com

5)



QR = _____

6)

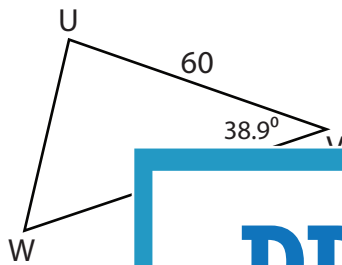


XY = _____

Missing Sides

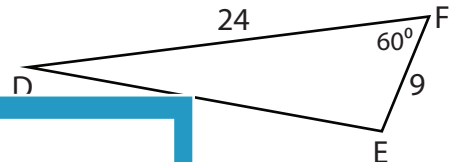
Find the measure of each indicated side. Round your answer to the nearest tenth.

1)



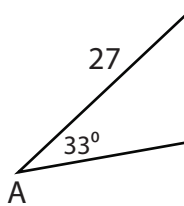
$$UW = \underline{\hspace{2cm}}$$

2)

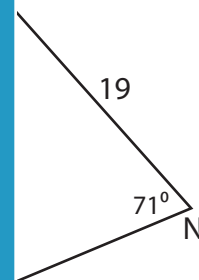


$$DE = \underline{21}$$

3)

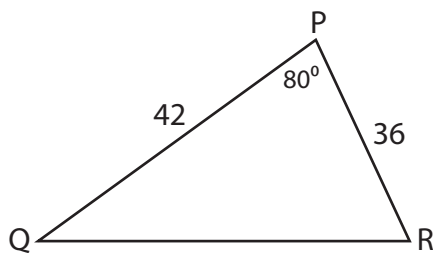


$$AC = \underline{\hspace{2cm}}$$



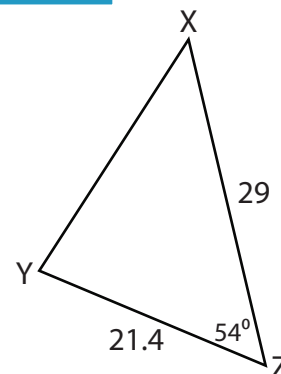
$$MP = \underline{18.8}$$

5)



$$QR = \underline{50.3}$$

6)



$$XY = \underline{23.9}$$

PREVIEW

Gain complete access to the largest
collection of worksheets in all subjects!

Members, please
log in to
download this
worksheet.

Not a member?
Please sign up to
gain complete
access.

www.mathworksheets4kids.com