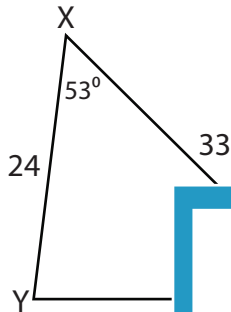


Missing Sides and Angles

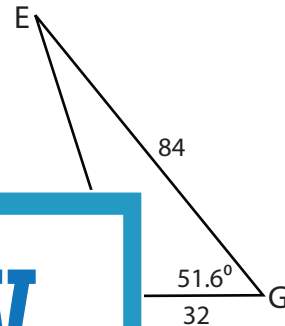
Find the measure of each indicated side or angle. Round your answer to the nearest tenth.

1)



YZ = _____

2)



EF = _____

3)



UL = _____

PREVIEW

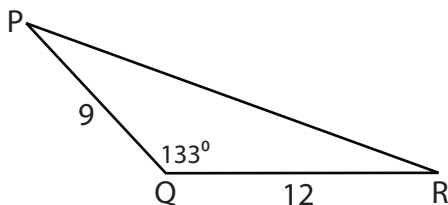
Gain complete access to the largest collection of worksheets in all subjects!

Members, please log in to download this worksheet.

Not a member? Please sign up to gain complete access.

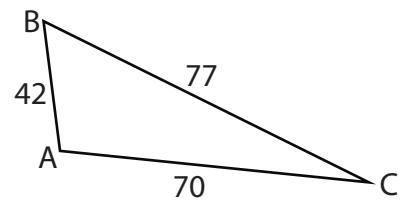
www.mathworksheets4kids.com

5)



PR = _____

6)

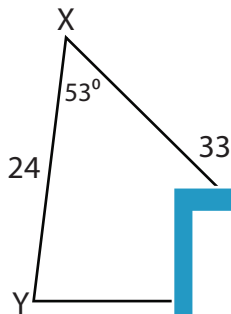


$m\angle C =$ _____

Missing Sides and Angles

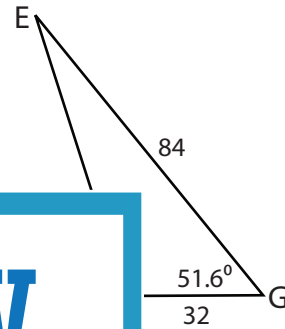
Find the measure of each indicated side or angle. Round your answer to the nearest tenth.

1)

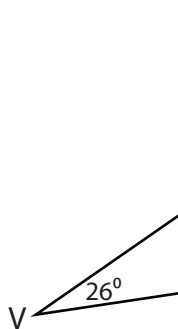


YZ = _____

2)

**21.4°**

3)



UV = _____

62.2°

PREVIEW

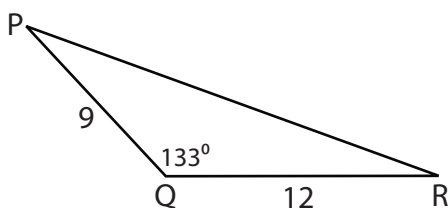
Gain complete access to the largest collection of worksheets in all subjects!

Members, please log in to download this worksheet.

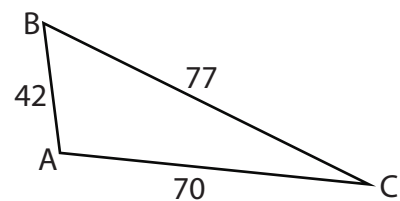
Not a member? Please sign up to gain complete access.

www.mathworksheets4kids.com

5)

PR = **19.3**

6)

 $m\angle C =$ **32.8°**