

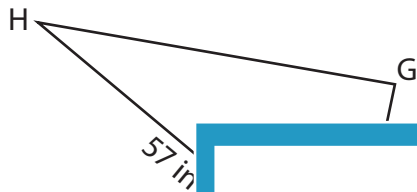
Name : _____

T1S2

Solving Triangles

Solve each triangle from the given measurements. Round your answer to the nearest tenth.

1)

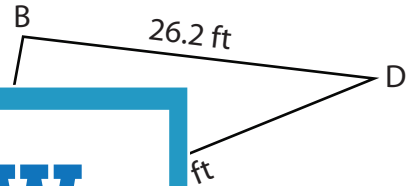


$m\angle G =$ _____

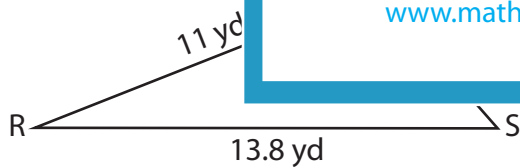
$m\angle H =$ _____

$f =$ _____

2)



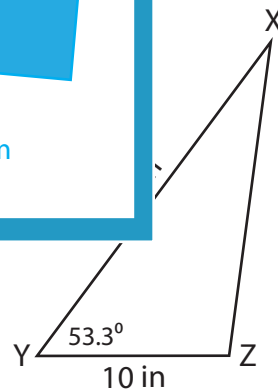
3)



$m\angle R =$ _____

$m\angle S =$ _____

$m\angle T =$ _____



$m\angle X =$ _____

$m\angle Z =$ _____

$y =$ _____

PREVIEW

Gain complete access to the largest collection of worksheets in all subjects!

Members, please log in to download this worksheet.

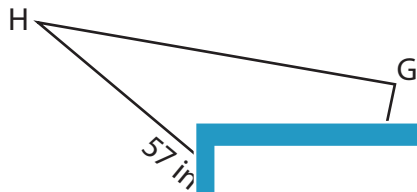
Not a member? Please sign up to gain complete access.

www.mathworksheets4kids.com

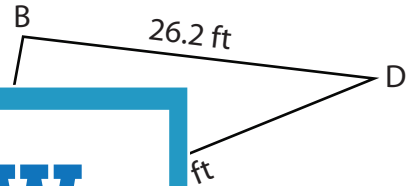
Solving Triangles

Solve each triangle from the given measurements. Round your answer to the nearest tenth.

1)



2)



$m\angle G =$ _____

93.6° _____

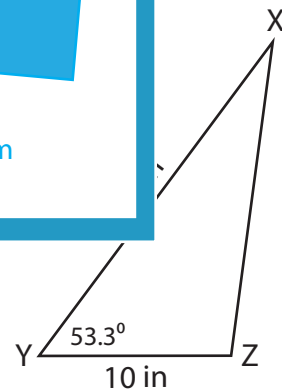
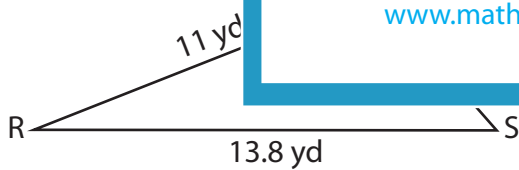
$m\angle H =$ _____

57.5° _____

$f =$ _____

28.9° _____

3)



$m\angle R =$ 21.6°

$m\angle X =$ 29.1°

$m\angle S =$ 48.6°

$m\angle Z =$ 97.6°

$m\angle T =$ 109.8°

$y =$ 16.5 in

PREVIEW

Gain complete access to the largest collection of worksheets in all subjects!

Members, please log in to download this worksheet.

Not a member? Please sign up to gain complete access.

www.mathworksheets4kids.com