

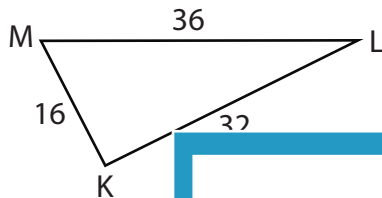
Name : _____

Unknown Angles

L1S2

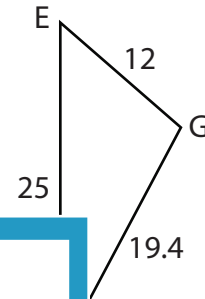
Find the measure of each indicated angle. Round your answer to the nearest tenth.

1)

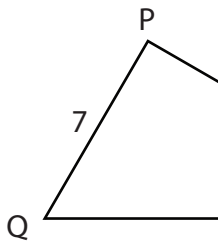


$m\angle L =$ _____

2)



3)



$m\angle Q =$ _____

PREVIEW

Gain complete access to the largest collection of worksheets in all subjects!

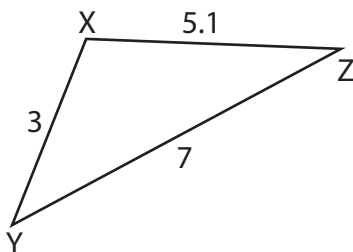
Members, please log in to download this worksheet.

Not a member? Please sign up to gain complete access.

www.mathworksheets4kids.com

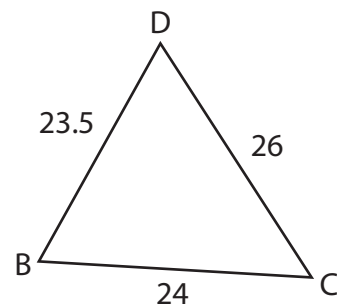


5)



$m\angle Y =$ _____

6)



$m\angle B =$ _____

Name : _____

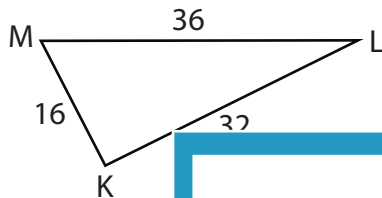
Answer key

Unknown Angles

L1S2

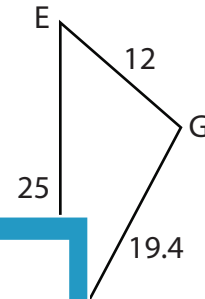
Find the measure of each indicated angle. Round your answer to the nearest tenth.

1)



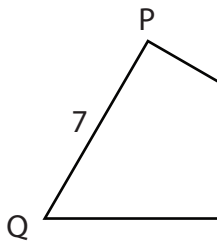
$m\angle L =$ _____

2)



103°

3)



$m\angle Q =$ _____



85.9°

PREVIEW

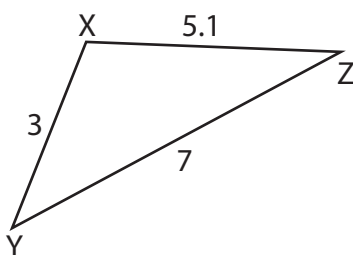
Gain complete access to the largest collection of worksheets in all subjects!

Members, please log in to download this worksheet.

Not a member? Please sign up to gain complete access.

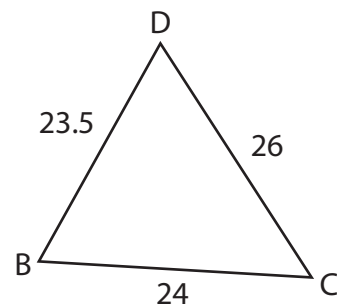
www.mathworksheets4kids.com

5)



$m\angle Y =$ 40.4°

6)



$m\angle B =$ 66.4°