

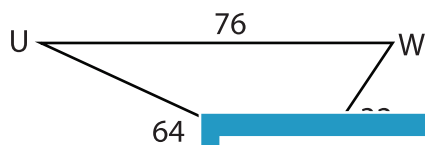
Name : _____

L1S3

Unknown Angles

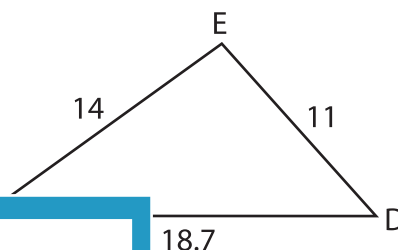
Find the measure of each indicated angle. Round your answer to the nearest tenth.

1)

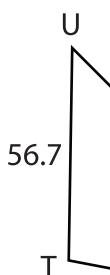


$m\angle W =$ _____

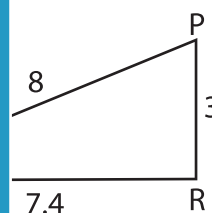
2)



3)



$m\angle S =$ _____



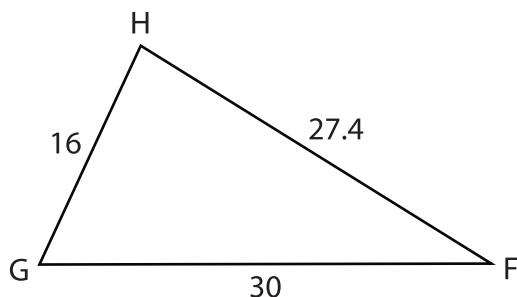
Gain complete access to the largest collection of worksheets in all subjects!

Members, please log in to download this worksheet.

Not a member? Please sign up to gain complete access.

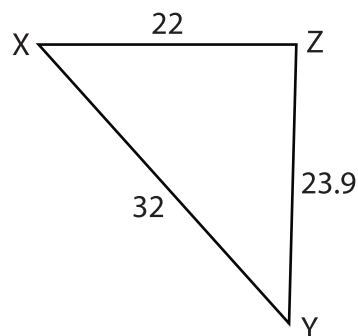
www.mathworksheets4kids.com

5)



$m\angle H =$ _____

6)



$m\angle X =$ _____