

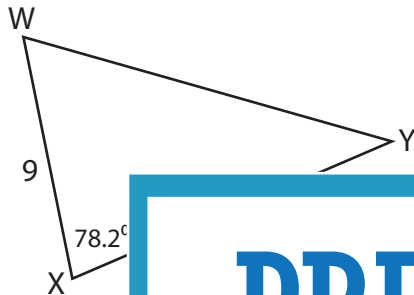
Name : _____

L2S3

Unknown Angles

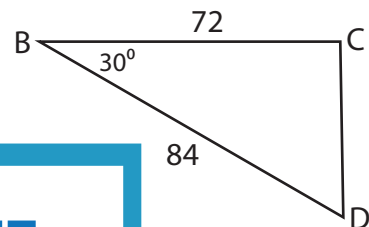
Find the measure of each indicated angle. Round your answer to the nearest tenth.

1)

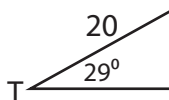


$m\angle Y =$ _____

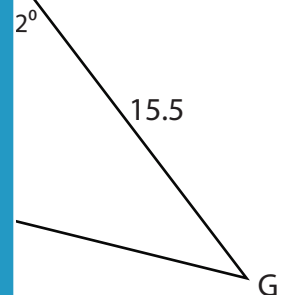
2)



3)



$m\angle R =$ _____



PREVIEW

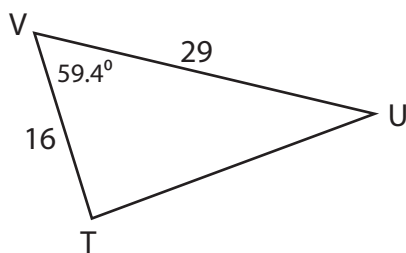
Gain complete access to the largest collection of worksheets in all subjects!

Members, please log in to download this worksheet.

Not a member? Please sign up to gain complete access.

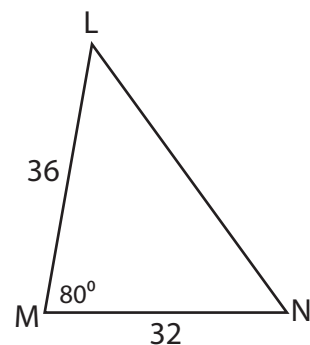
www.mathworksheets4kids.com

5)



$m\angle T =$ _____

6)



$m\angle L =$ _____

Name : _____

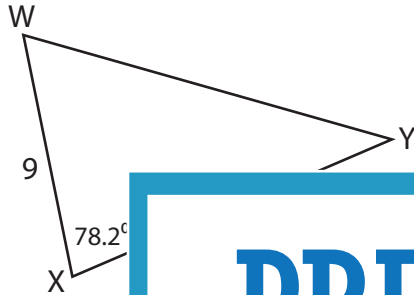
Answer key

L2S3

Unknown Angles

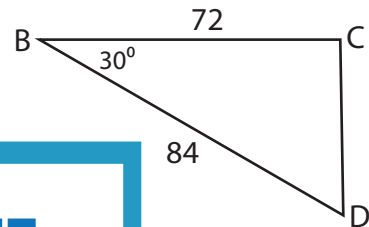
Find the measure of each indicated angle. Round your answer to the nearest tenth.

1)



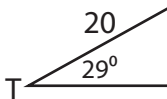
$m\angle Y =$ _____

2)

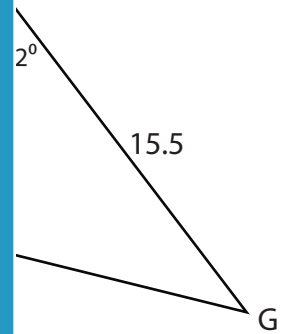


91° _____

3)

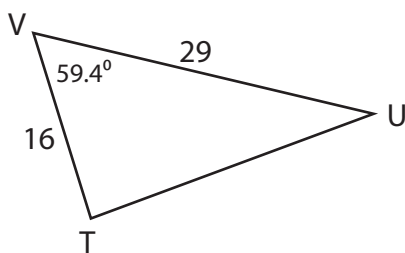


$m\angle R =$ _____



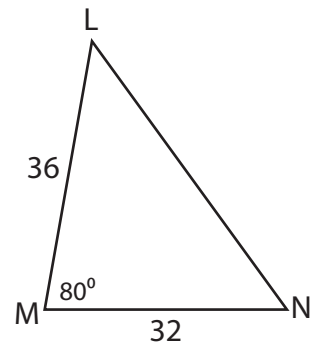
76° _____

5)



$m\angle T =$ 87.1°

6)



$m\angle L =$ 46°

PREVIEW

Gain complete access to the largest collection of worksheets in all subjects!

Members, please log in to download this worksheet.

Not a member? Please sign up to gain complete access.

www.mathworksheets4kids.com