

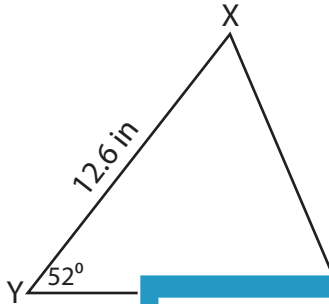
Name : _____

Area of a Triangle

Sheet 1

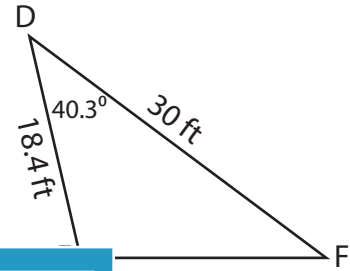
Find the area of each triangle. Round your answer to two decimal places.

1)

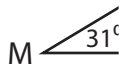


Area = _____

2)



3)



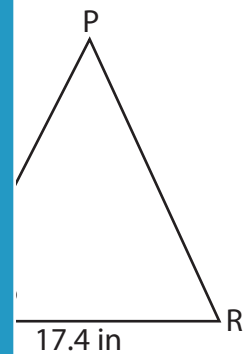
Area = _____

Gain complete access to the largest collection of worksheets in all subjects!

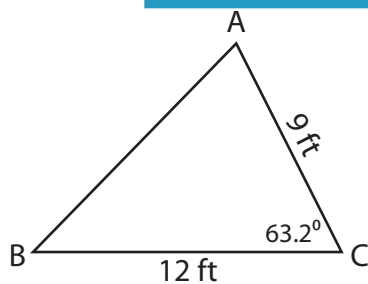
Members, please log in to download this worksheet.

Not a member? Please sign up to gain complete access.

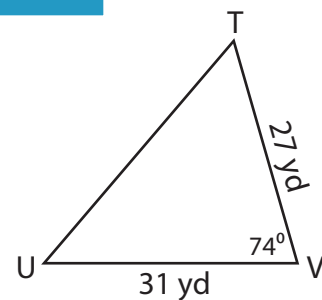
www.mathworksheets4kids.com



5)



Area = _____

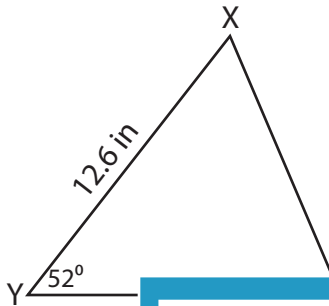


Area = _____

Area of a Triangle

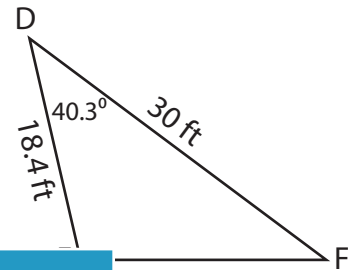
Find the area of each triangle. Round your answer to two decimal places.

1)

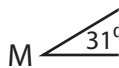


Area = _____

2)

**178.51 ft²**

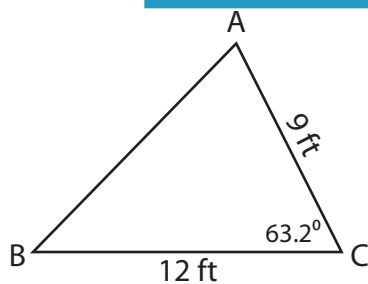
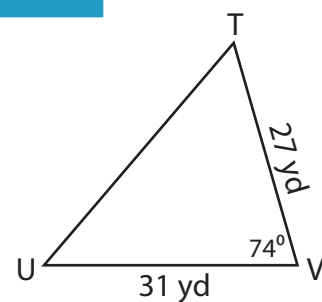
3)



Area = _____

154.9 in²

5)

Area = **48.2 ft²**Area = **402.29 yd²****PREVIEW**

Gain complete access to the largest
collection of worksheets in all subjects!

Members, please
log in to
download this
worksheet.

Not a member?
Please sign up to
gain complete
access.

www.mathworksheets4kids.com