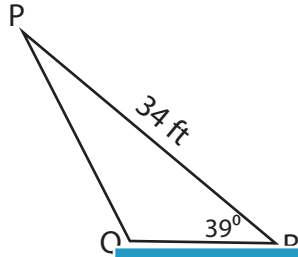


Name : _____

Area of a Triangle

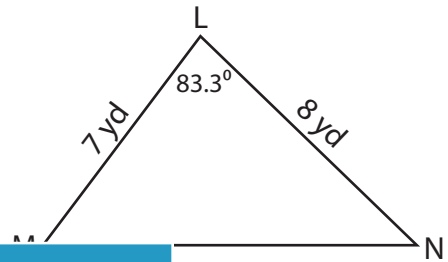
Find the area of each triangle. Round your answer to two decimal places.

1)

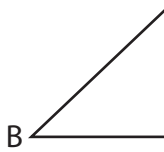


Area = _____

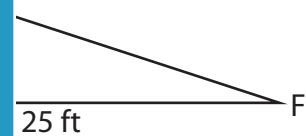
2)



3)



Area = _____



PREVIEW

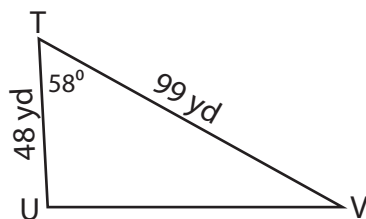
Gain complete access to the largest collection of worksheets in all subjects!

Members, please log in to download this worksheet.

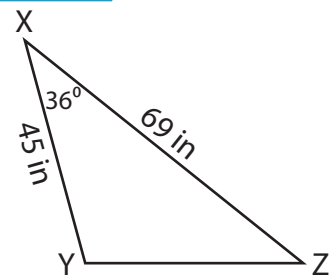
Not a member? Please sign up to gain complete access.

www.mathworksheets4kids.com

5)



Area = _____



Area = _____

Name : _____

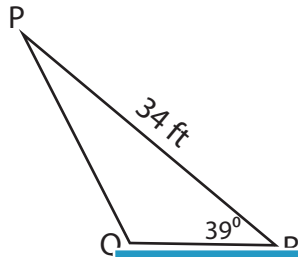
Answer key

Sheet 2

Area of a Triangle

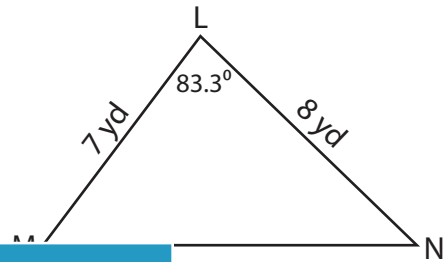
Find the area of each triangle. Round your answer to two decimal places.

1)



Area = _____

2)



27.81 yd²

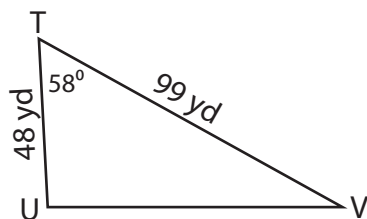
3)



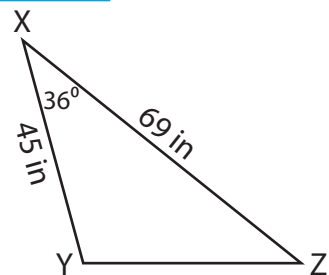
Area = _____

110.32 ft²

5)



Area = **2,014.96 yd²**



Area = **912.54 in²**

PREVIEW

Gain complete access to the largest collection of worksheets in all subjects!

Members, please log in to download this worksheet.

Not a member? Please sign up to gain complete access.

www.mathworksheets4kids.com