

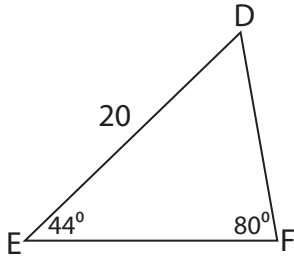
Name : _____

Missing Sides

Sheet 1

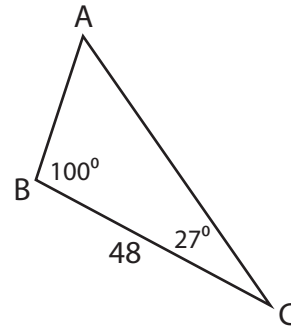
Find the measure of each indicated side. Round your answer to the nearest tenth.

1)



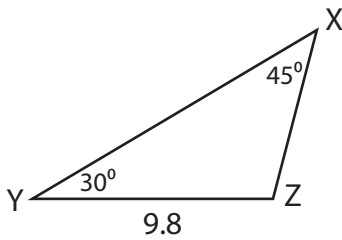
DF = _____

2)



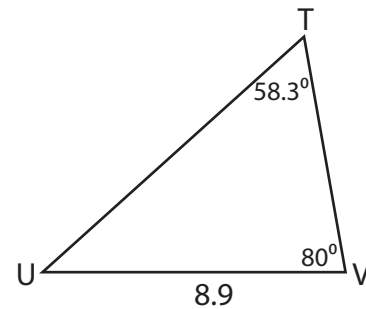
AC = _____

3)



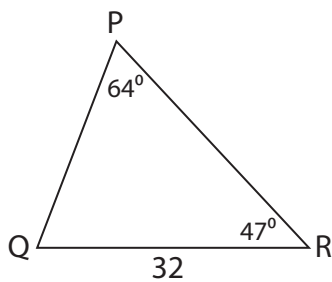
XZ = _____

4)



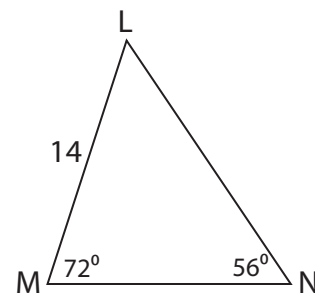
TV = _____

5)



PQ = _____

6)



MN = _____

Name : _____

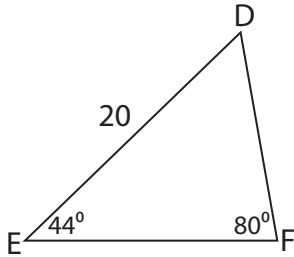
Answer key

Sheet 1

Missing Sides

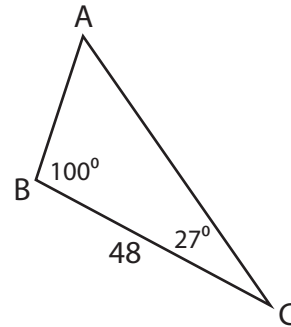
Find the measure of each indicated side. Round your answer to the nearest tenth.

1)



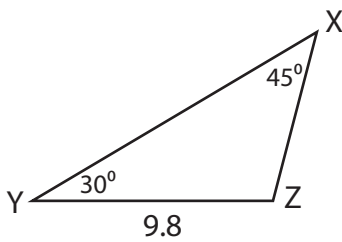
DF = 14.1

2)



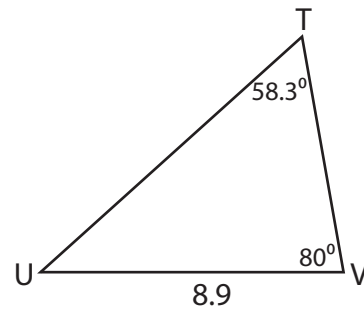
AC = 59.2

3)



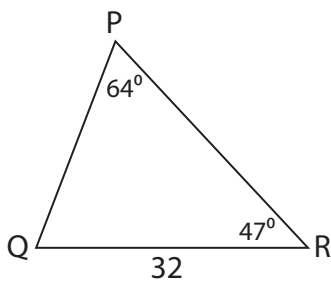
XZ = 6.9

4)



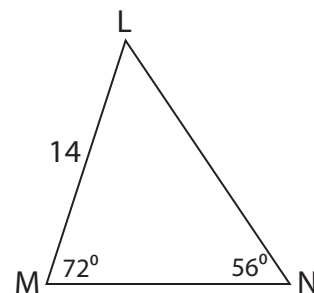
TV = 7

5)



PQ = 26

6)



MN = 13.3