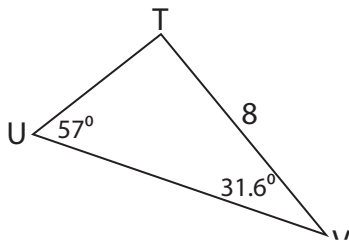


Missing Sides

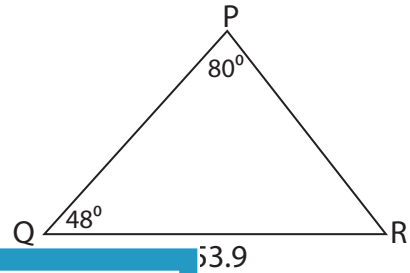
Find the measure of each indicated side. Round your answer to the nearest tenth.

1)



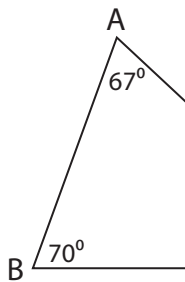
UV = _____

2)

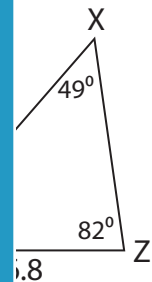


53.9

3)

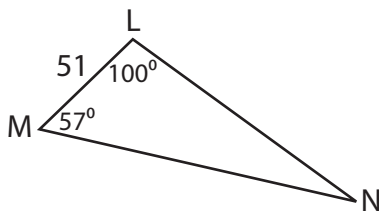


BC = _____

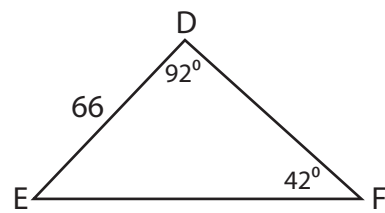


1.8

5)



LN = _____



DF = _____

PREVIEW

Gain complete access to the largest collection of worksheets in all subjects!

Members, please log in to download this worksheet.

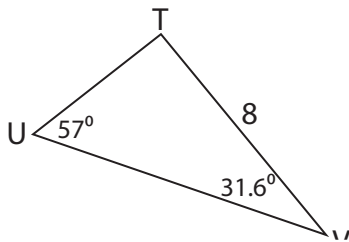
Not a member? Please sign up to gain complete access.

www.mathworksheets4kids.com

Missing Sides

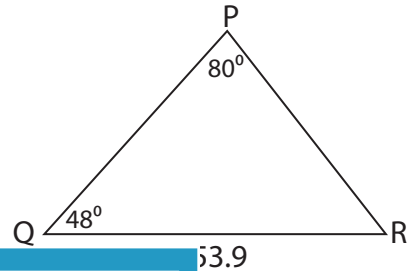
Find the measure of each indicated side. Round your answer to the nearest tenth.

1)

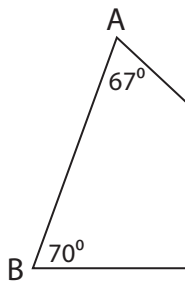


UV = _____

2)

_____ **40.7**

3)



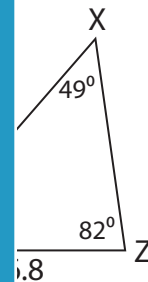
BC = _____

Gain complete access to the largest
collection of worksheets in all subjects!

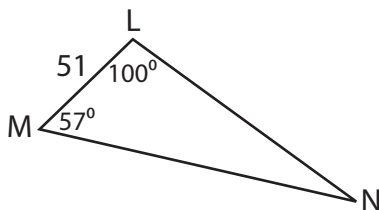
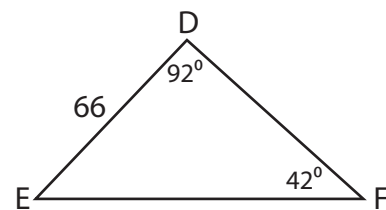
Members, please
log in to
download this
worksheet.

Not a member?
Please sign up to
gain complete
access.

www.mathworksheets4kids.com

_____ **8.9**

5)

LN = _____ **109.5**DF = _____ **71**