

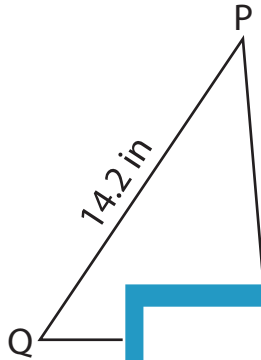
Name : _____

T1S2

Solving Triangles

Solve each triangle from the given measurements. Round your answer to the nearest tenth.

1)

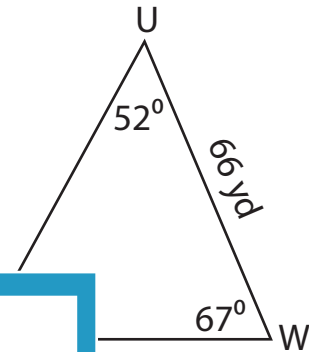


$m\angle P =$ _____

$m\angle Q =$ _____

$q =$ _____

2)



3)



$m\angle Z =$ _____

$x =$ _____

$z =$ _____

$m\angle M =$ _____

$m\angle N =$ _____

$n =$ _____

PREVIEW

Gain complete access to the largest collection of worksheets in all subjects!

Members, please log in to download this worksheet.

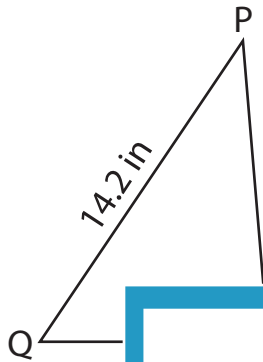
Not a member? Please sign up to gain complete access.

www.mathworksheets4kids.com

Solving Triangles

Solve each triangle from the given measurements. Round your answer to the nearest tenth.

1)

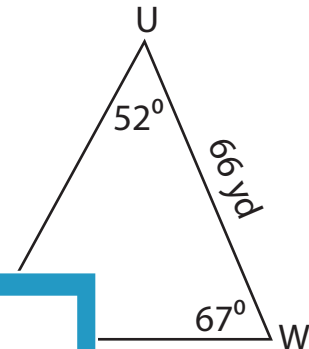


$m\angle P =$ _____

$m\angle Q =$ _____

$q =$ _____

2)



61°

59.5 yd

69.5 yd

3)



$m\angle Z =$ **64.2°**

$x =$ **13.3 ft**

$z =$ **21 ft**

$m\angle M =$ **68.6°**

$m\angle N =$ **56.4°**

$n =$ **44.7 in**

PREVIEW

Gain complete access to the largest collection of worksheets in all subjects!

Members, please log in to download this worksheet.

Not a member? Please sign up to gain complete access.

www.mathworksheets4kids.com