

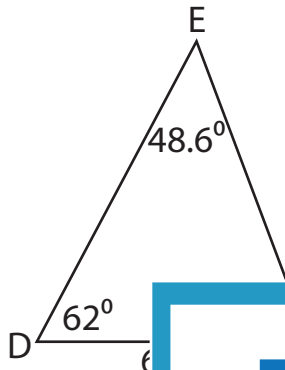
Name : _____

T1S3

Solving Triangles

Solve each triangle from the given measurements. Round your answer to the nearest tenth.

1)

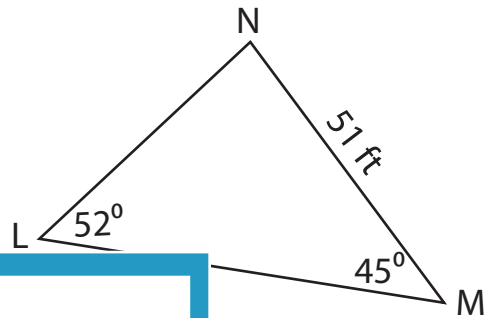


$m\angle F =$ _____

d = _____

f = _____

2)



PREVIEW

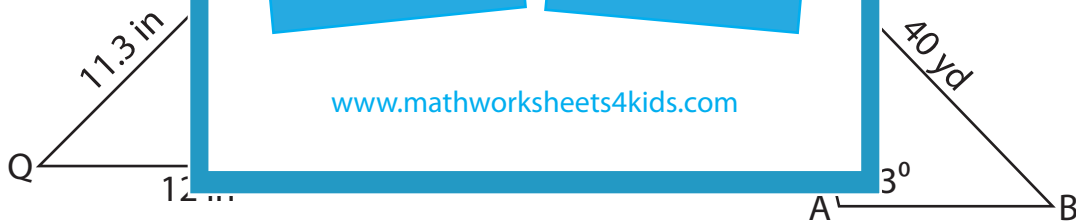
Gain complete access to the largest collection of worksheets in all subjects!

Members, please log in to download this worksheet.

Not a member? Please sign up to gain complete access.

www.mathworksheets4kids.com

3)



$m\angle R =$ _____

$m\angle B =$ _____

$m\angle Q =$ _____

$m\angle C =$ _____

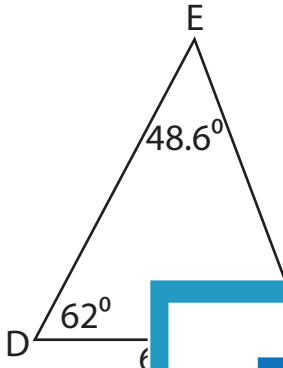
q = _____

c = _____

Solving Triangles

Solve each triangle from the given measurements. Round your answer to the nearest tenth.

1)

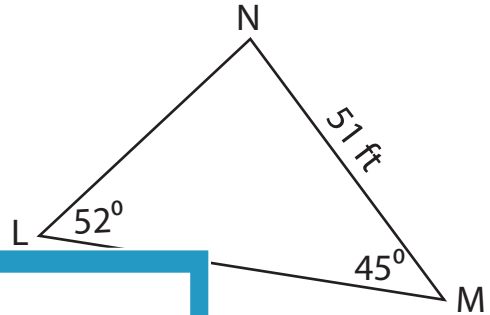


$m\angle F =$ _____

$d =$ _____

$f =$ _____

2)

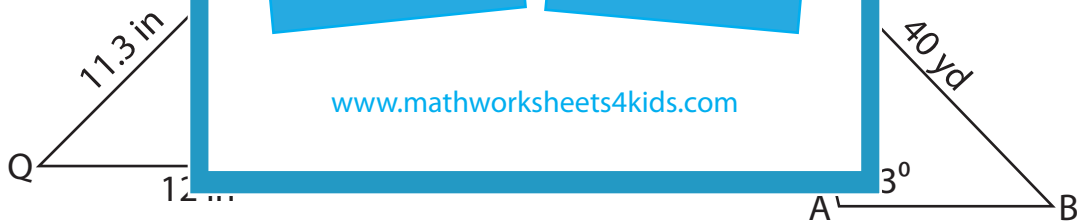


$m\angle N =$ **83°**

$l =$ **45.8 ft**

$m =$ **64.2 ft**

3)



$m\angle R =$ **63.5°**

$m\angle B =$ **47°**

$m\angle Q =$ **44.7°**

$m\angle C =$ **30°**

$q =$ **8.9 in**

$c =$ **20.5 yd**

PREVIEW

Gain complete access to the largest collection of worksheets in all subjects!

Members, please log in to download this worksheet.

Not a member? Please sign up to gain complete access.

www.mathworksheets4kids.com