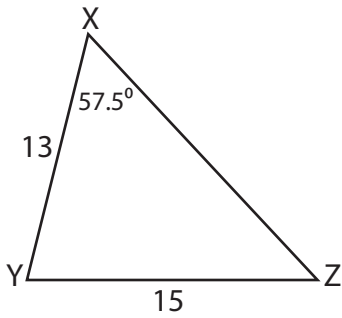


Name : _____

Unknown Angles

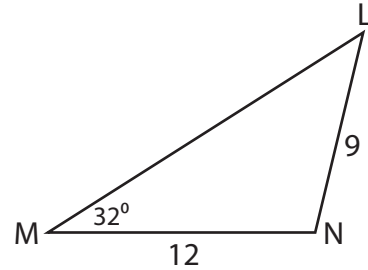
Find the measure of each indicated angle. Round your answer to the nearest tenth.

1)



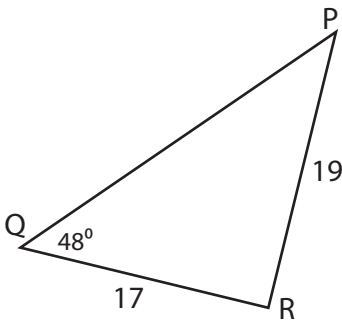
$m\angle Z =$ _____

2)



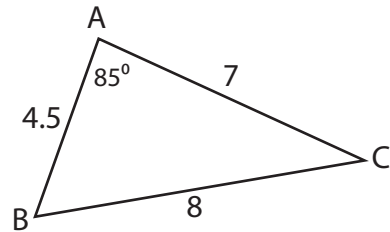
$m\angle N =$ _____

3)



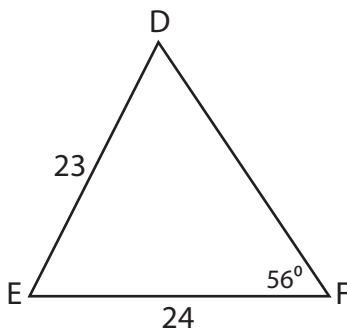
$m\angle R =$ _____

4)



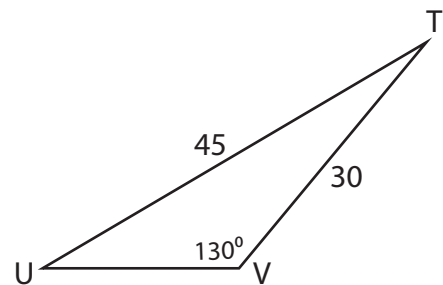
$m\angle B =$ _____

5)



$m\angle D =$ _____

6)

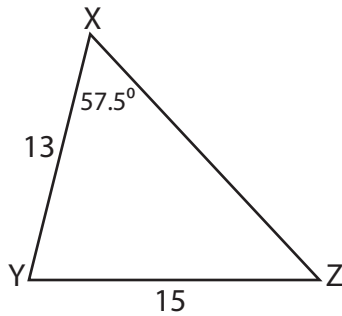


$m\angle U =$ _____

Unknown Angles

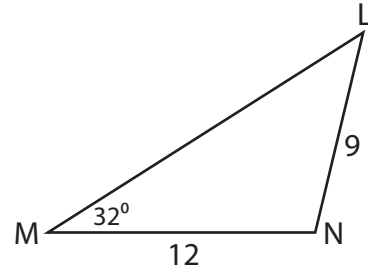
Find the measure of each indicated angle. Round your answer to the nearest tenth.

1)



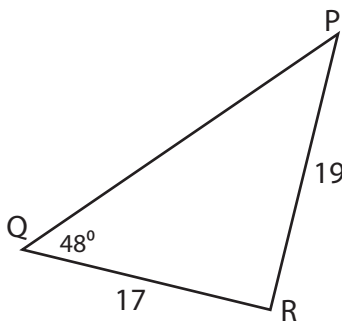
$$m\angle Z = \underline{47^\circ}$$

2)



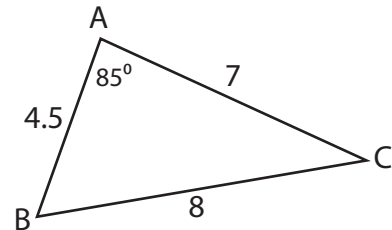
$$m\angle N = \underline{103^\circ}$$

3)



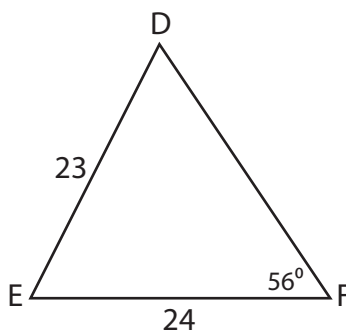
$$m\angle R = \underline{90.3^\circ}$$

4)



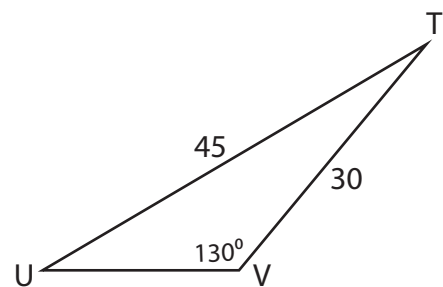
$$m\angle B = \underline{60.7^\circ}$$

5)



$$m\angle D = \underline{59.9^\circ}$$

6)



$$m\angle U = \underline{30.7^\circ}$$