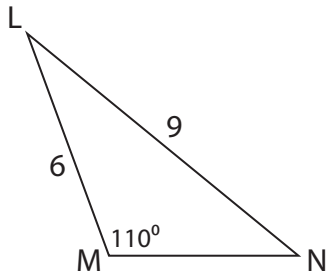


Unknown Angles

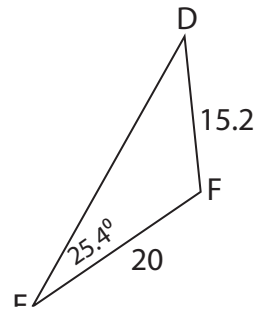
Find the measure of each indicated angle. Round your answer to the nearest tenth.

1)



$m\angle L =$ _____

2)



3)



$m\angle V =$ _____

PREVIEW

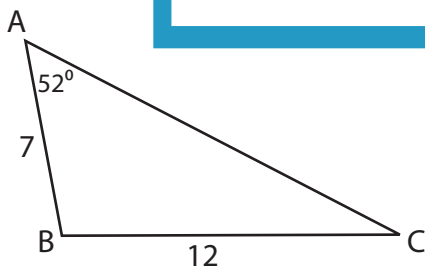
Gain complete access to the largest collection of worksheets in all subjects!

Members, please log in to download this worksheet.

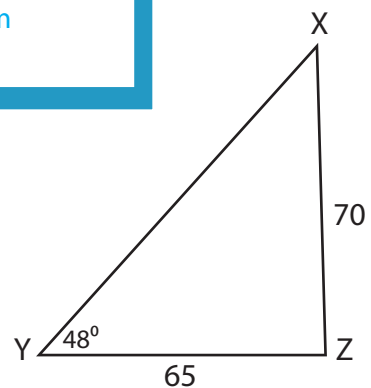
Not a member? Please sign up to gain complete access.

www.mathworksheets4kids.com

5)



$m\angle B =$ _____

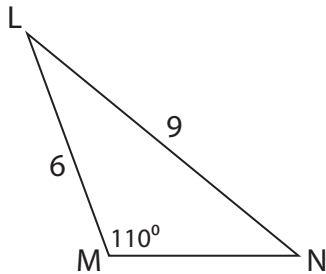


$m\angle X =$ _____

Unknown Angles

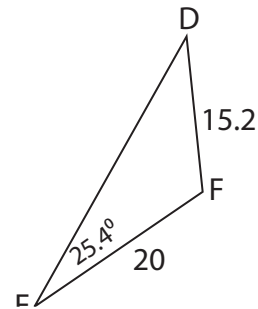
Find the measure of each indicated angle. Round your answer to the nearest tenth.

1)



$m\angle L = \underline{\hspace{2cm}}$

2)



$\underline{\hspace{2cm}} = \mathbf{34.4^\circ}$

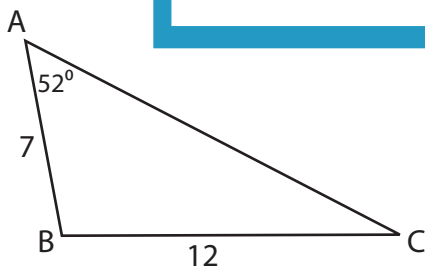
3)



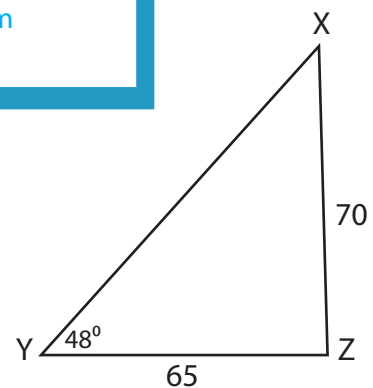
$m\angle V = \underline{\hspace{2cm}}$

$\underline{\hspace{2cm}} = \mathbf{71.6^\circ}$

5)



$m\angle B = \underline{\hspace{2cm}} \mathbf{100.6^\circ}$



$m\angle X = \underline{\hspace{2cm}} \mathbf{43.6^\circ}$

PREVIEW

Gain complete access to the largest collection of worksheets in all subjects!

Members, please log in to download this worksheet.

Not a member? Please sign up to gain complete access.

www.mathworksheets4kids.com