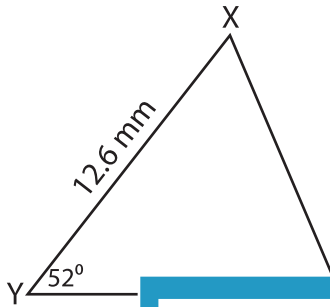


Name : _____

Area of a Triangle

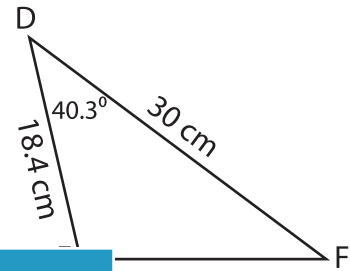
Find the area of each triangle. Round your answer to two decimal places.

1)

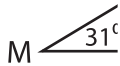


Area = _____

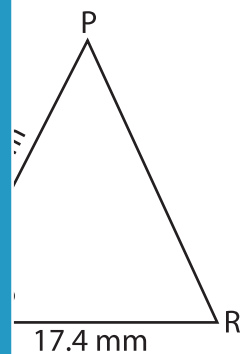
2)



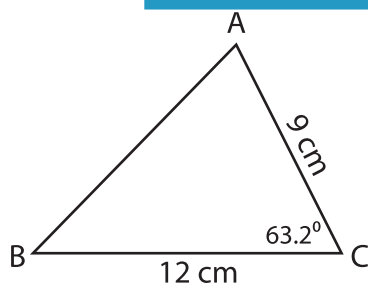
3)



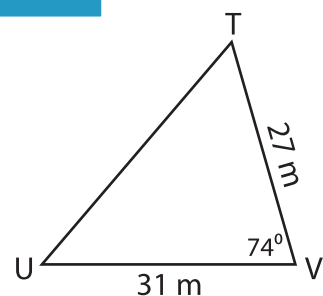
Area = _____



5)



Area = _____



Area = _____

PREVIEW

Gain complete access to the largest collection of worksheets in all subjects!

Members, please log in to download this worksheet.

Not a member? Please sign up to gain complete access.

www.mathworksheets4kids.com