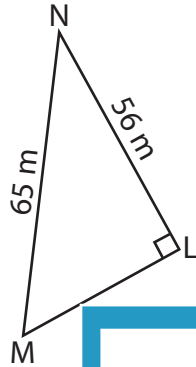


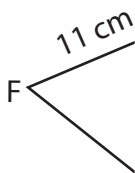
Trigonometric Ratios

Find all the three primary trigonometric ratios for the mentioned angle.

1) $\angle M$



2) $\angle F$



PREVIEW

Gain complete access to the largest collection of worksheets in all subjects!

Members, please log in to download this worksheet.

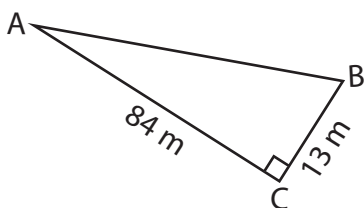
Not a member? Please sign up to gain complete access.

www.mathworksheets4kids.com

3) $\angle X$

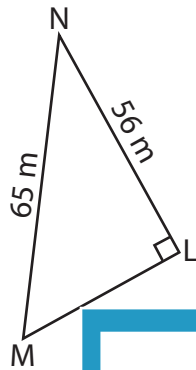


4) $\angle B$



Trigonometric Ratios

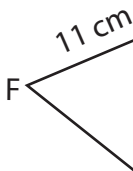
Find all the three primary trigonometric ratios for the mentioned angle.

1) $\angle M$ 

$$\sin M = \frac{56}{65}$$

$$\cos M = \frac{33}{65}$$

$$\tan M = \frac{56}{33}$$

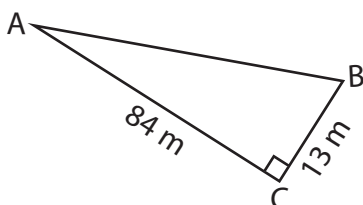
2) $\angle F$ **PREVIEW**

Gain complete access to the largest collection of worksheets in all subjects!

Members, please log in to download this worksheet.

Not a member? Please sign up to gain complete access.

www.mathworksheets4kids.com

3) $\angle X$ 4) $\angle B$ 

$$\sin B = \frac{84}{85}$$

$$\cos B = \frac{13}{85}$$

$$\tan B = \frac{84}{13}$$
