

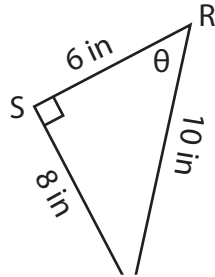
Name : _____

Trigonometric Ratios

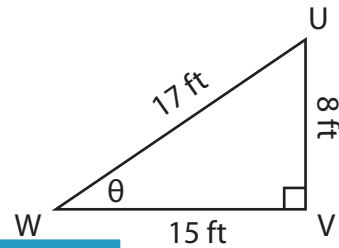
Lengths: S1

Find the indicated trigonometric ratio.

1) $\tan \theta$



2) $\sin \theta$



3) $\cos \theta$

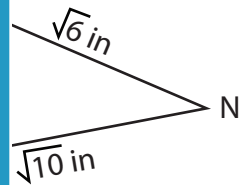


Gain complete access to the largest collection of worksheets in all subjects!

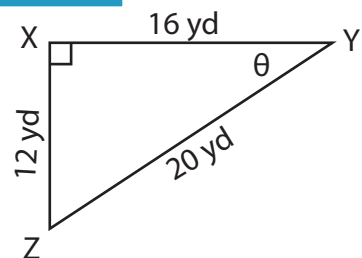
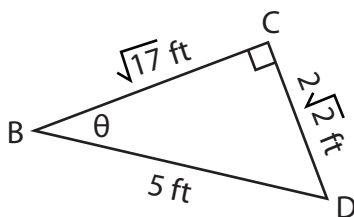
Members, please log in to download this worksheet.

Not a member? Please sign up to gain complete access.

www.mathworksheets4kids.com



5) $\sin \theta$

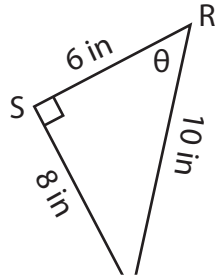


Trigonometric Ratios

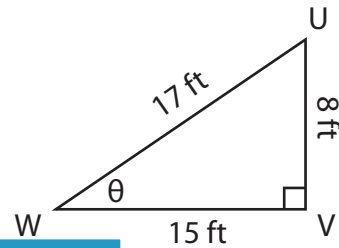
Lengths: S1

Find the indicated trigonometric ratio.

1) $\tan \theta$



2) $\sin \theta$



PREVIEW

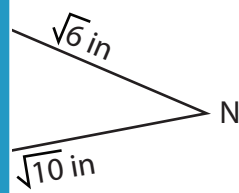
Gain complete access to the largest collection of worksheets in all subjects!

Members, please log in to download this worksheet.

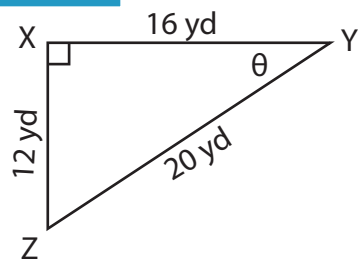
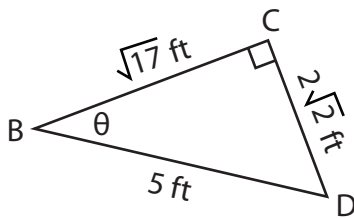
Not a member? Please sign up to gain complete access.

www.mathworksheets4kids.com

3) $\cos \theta$



5) $\sin \theta$



$\frac{4}{3}$

$\frac{3}{7}$

$\frac{12}{37}$

$\frac{6}{2}$

$\frac{2\sqrt{2}}{5}$

$\frac{4}{5}$