

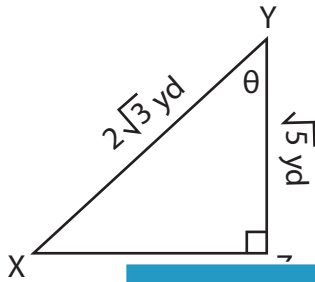
Name : \_\_\_\_\_

# Trigonometric Ratios

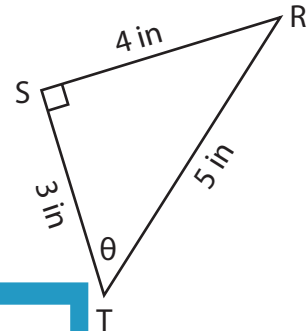
Lengths: S3

Find the indicated trigonometric ratio.

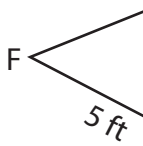
1)  $\sin \theta$



2)  $\cos \theta$



3)  $\tan \theta$



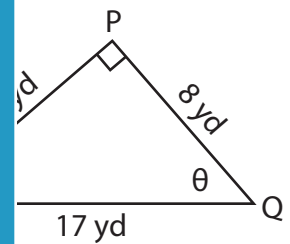
# PREVIEW

Gain complete access to the largest collection of worksheets in all subjects!

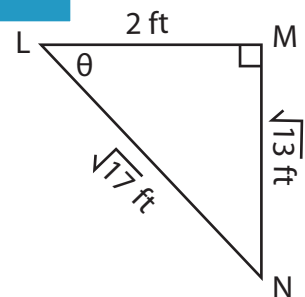
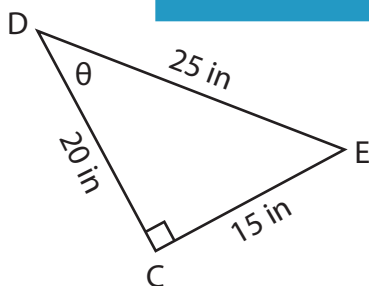
Members, please log in to download this worksheet.

Not a member? Please sign up to gain complete access.

[www.mathworksheets4kids.com](http://www.mathworksheets4kids.com)



5)  $\cos \theta$

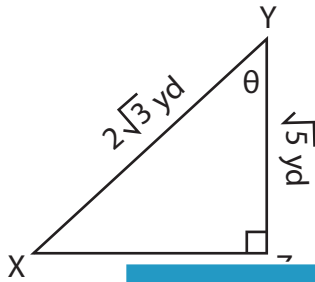


**Trigonometric Ratios**

Lengths: S3

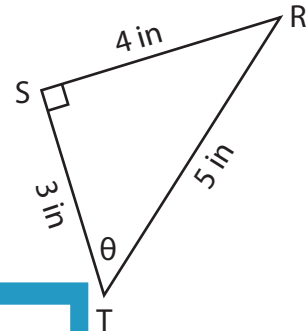
Find the indicated trigonometric ratio.

1)  $\sin \theta$



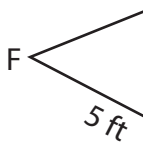
$\frac{\sqrt{21}}{6}$

2)  $\cos \theta$



$\frac{3}{5}$

3)  $\tan \theta$



$\frac{5}{12}$

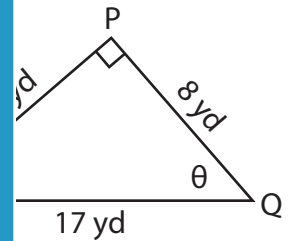
**PREVIEW**

Gain complete access to the largest collection of worksheets in all subjects!

Members, please log in to download this worksheet.

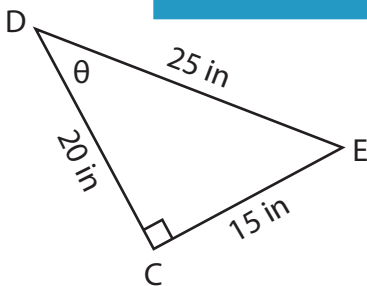
Not a member? Please sign up to gain complete access.

[www.mathworksheets4kids.com](http://www.mathworksheets4kids.com)

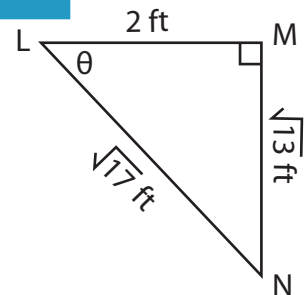


$\frac{5}{7}$

5)  $\cos \theta$



$\frac{4}{5}$



$\frac{\sqrt{13}}{2}$