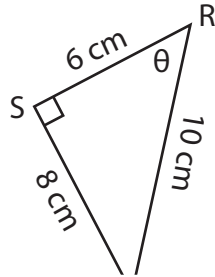


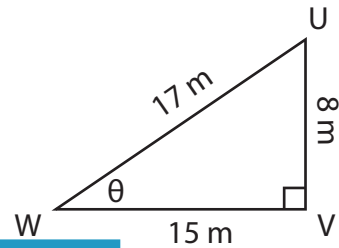
Trigonometric Ratios

Find the indicated trigonometric ratio.

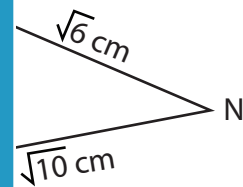
1) $\tan \theta$



2) $\sin \theta$



3) $\cos \theta$



PREVIEW

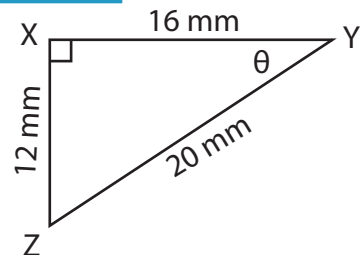
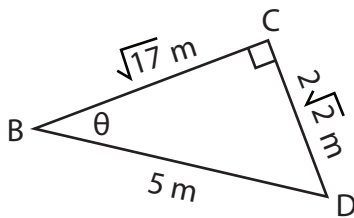
Gain complete access to the largest collection of worksheets in all subjects!

Members, please log in to download this worksheet.

Not a member? Please sign up to gain complete access.

www.mathworksheets4kids.com

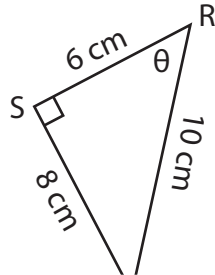
5) $\sin \theta$



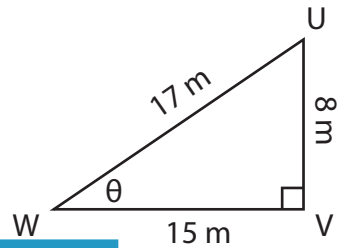
Trigonometric Ratios

Find the indicated trigonometric ratio.

1) $\tan \theta$



2) $\sin \theta$



PREVIEW

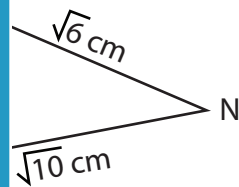
Gain complete access to the largest collection of worksheets in all subjects!

Members, please log in to download this worksheet.

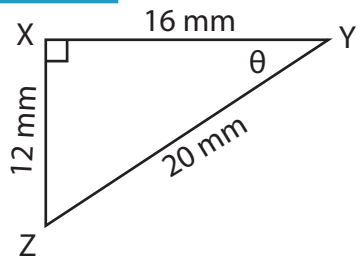
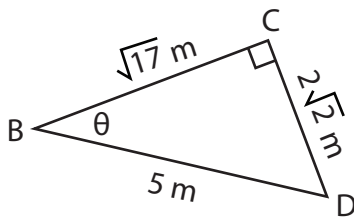
Not a member? Please sign up to gain complete access.

www.mathworksheets4kids.com

3) $\cos \theta$



5) $\sin \theta$



$\frac{2\sqrt{2}}{5}$

$\frac{4}{5}$