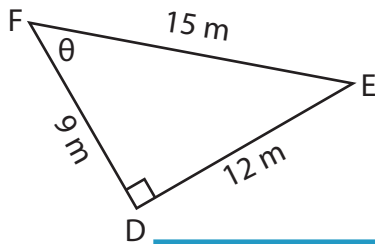


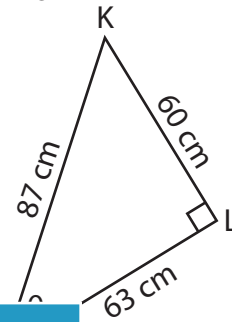
Trigonometric Ratios

Find the indicated trigonometric ratio.

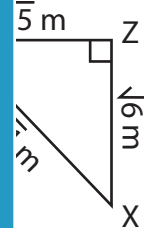
1) $\cos \theta$



2) $\tan \theta$



3) $\sin \theta$



PREVIEW

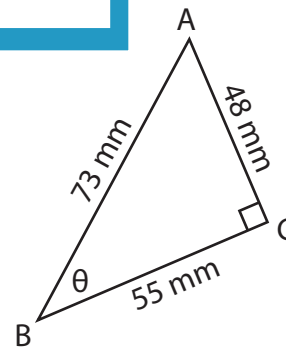
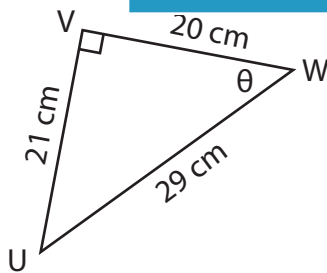
Gain complete access to the largest collection of worksheets in all subjects!

Members, please log in to download this worksheet.

Not a member? Please sign up to gain complete access.

www.mathworksheets4kids.com

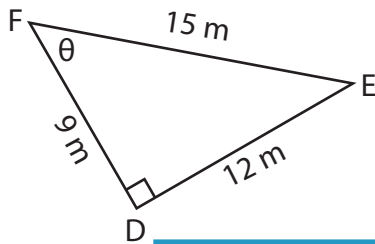
5) $\tan \theta$



Trigonometric Ratios

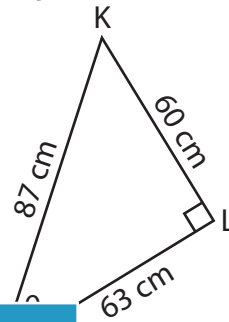
Find the indicated trigonometric ratio.

1) $\cos \theta$



$\frac{3}{5}$

2) $\tan \theta$

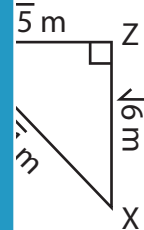


$\frac{60}{63}$

3) $\sin \theta$



$\frac{\sqrt{10}}{5}$



$\frac{5}{1}$

PREVIEW

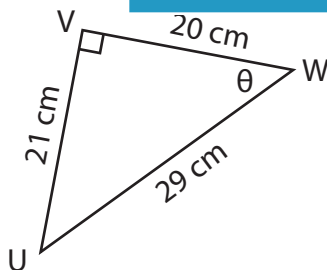
Gain complete access to the largest collection of worksheets in all subjects!

Members, please log in to download this worksheet.

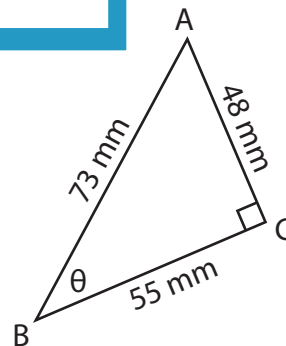
Not a member? Please sign up to gain complete access.

www.mathworksheets4kids.com

5) $\tan \theta$



$\frac{21}{20}$



$\frac{48}{73}$