

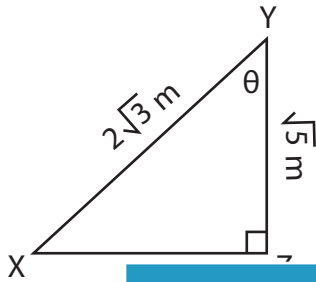
Name : _____

Lengths: S3

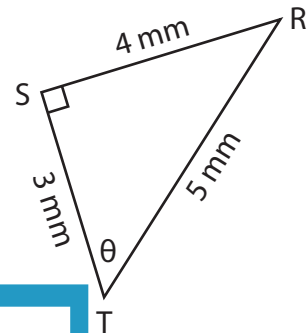
Trigonometric Ratios

Find the indicated trigonometric ratio.

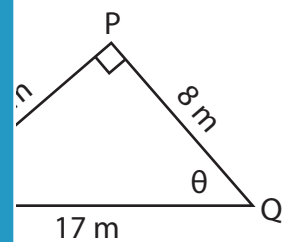
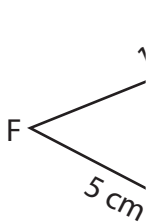
1) $\sin \theta$



2) $\cos \theta$



3) $\tan \theta$



PREVIEW

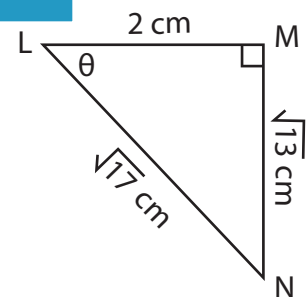
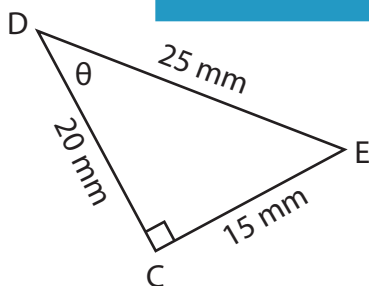
Gain complete access to the largest collection of worksheets in all subjects!

Members, please log in to download this worksheet.

Not a member? Please sign up to gain complete access.

www.mathworksheets4kids.com

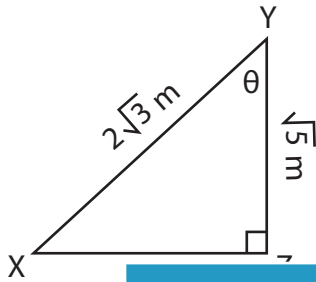
5) $\cos \theta$



Trigonometric Ratios

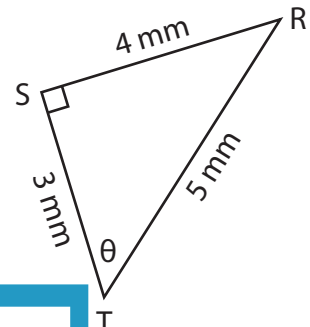
Find the indicated trigonometric ratio.

1) $\sin \theta$



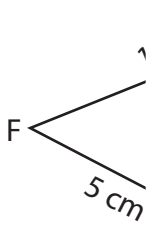
$\frac{\sqrt{21}}{6}$

2) $\cos \theta$



$\frac{3}{5}$

3) $\tan \theta$



$\frac{5}{12}$

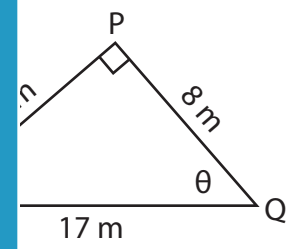
PREVIEW

Gain complete access to the largest collection of worksheets in all subjects!

Members, please log in to download this worksheet.

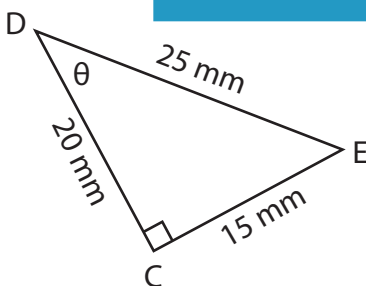
Not a member? Please sign up to gain complete access.

www.mathworksheets4kids.com

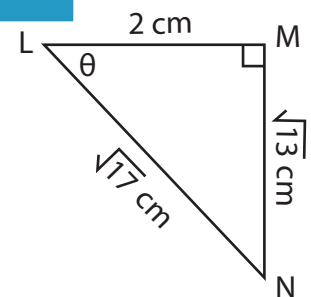


$\frac{5}{7}$

5) $\cos \theta$



$\frac{4}{5}$



$\frac{\sqrt{13}}{2}$