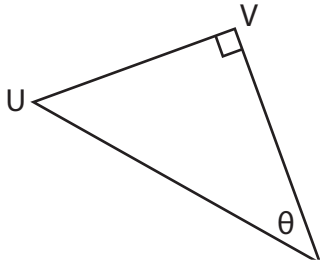


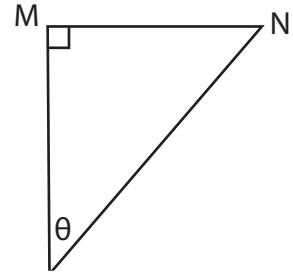
Trigonometric Ratios

Find each trigonometric ratio using segments.

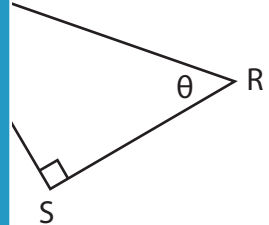
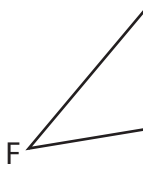
1) $\tan \theta$



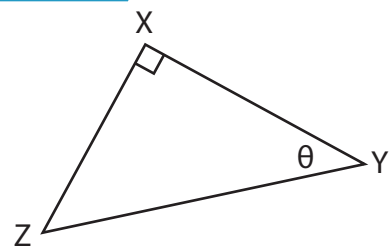
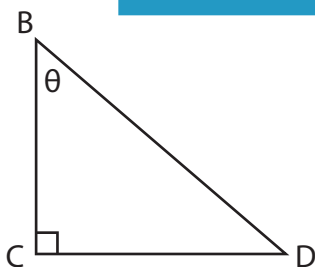
2) $\sin \theta$



3) $\cos \theta$



5) $\sin \theta$



PREVIEW

Gain complete access to the largest collection of worksheets in all subjects!

Members, please log in to download this worksheet.

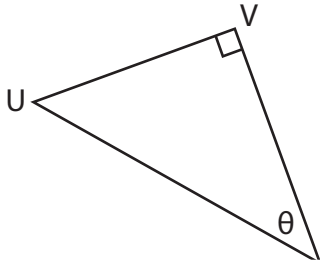
Not a member? Please sign up to gain complete access.

www.mathworksheets4kids.com

Trigonometric Ratios

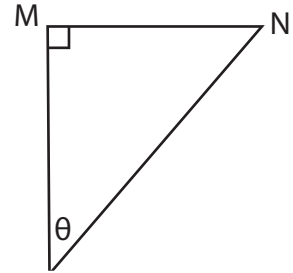
Find each trigonometric ratio using segments.

1) $\tan \theta$



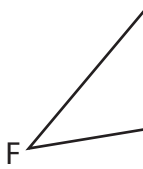
$\frac{UV}{VW}$

2) $\sin \theta$

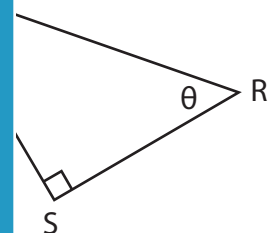


$\frac{MN}{NN}$

3) $\cos \theta$

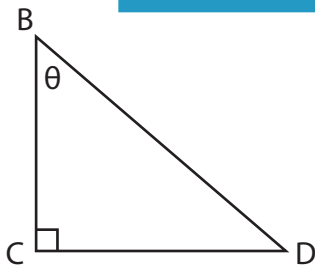


$\frac{GH}{FH}$

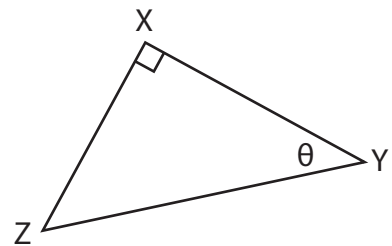


$\frac{TS}{RS}$

5) $\sin \theta$



$\frac{CD}{BD}$



$\frac{XY}{YZ}$

PREVIEW

Gain complete access to the largest collection of worksheets in all subjects!

Members, please log in to download this worksheet.

Not a member? Please sign up to gain complete access.

www.mathworksheets4kids.com