

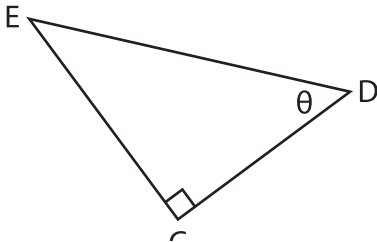
Name : \_\_\_\_\_

# Trigonometric Ratios

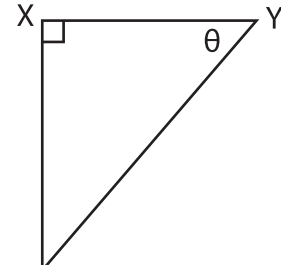
Segments: S3

Find each trigonometric ratio using segments.

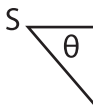
1)  $\cos \theta$



2)  $\tan \theta$



3)  $\sin \theta$

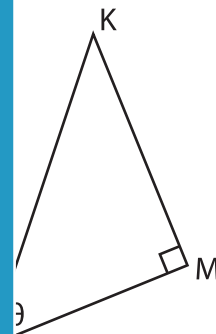


**PREVIEW**  
Gain complete access to the largest collection of worksheets in all subjects!

Members, please log in to download this worksheet.

Not a member? Please sign up to gain complete access.

[www.mathworksheets4kids.com](http://www.mathworksheets4kids.com)



5)  $\tan \theta$

