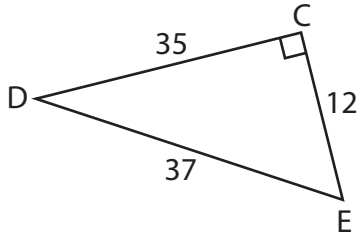


Trigonometric Ratios

Find all the three reciprocal trigonometric ratios for the mentioned angle.

1) $\angle D$



2) $\angle G$



PREVIEW

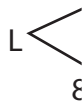
Gain complete access to the largest collection of worksheets in all subjects!

Members, please log in to download this worksheet.

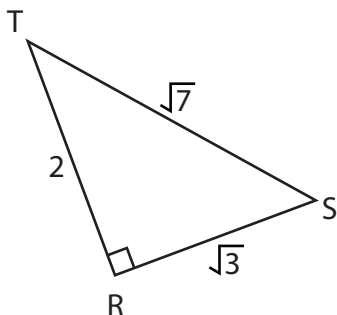
Not a member? Please sign up to gain complete access.

www.mathworksheets4kids.com

3) $\angle N$



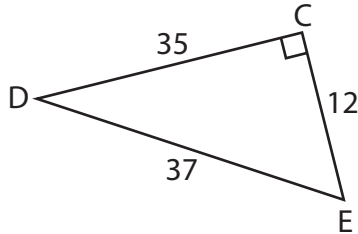
4) $\angle T$



Trigonometric Ratios

Find all the three reciprocal trigonometric ratios for the mentioned angle.

1) $\angle D$



$$\csc D = \frac{37}{12}$$

$$\sec D = \frac{37}{35}$$

$$\cot D = \frac{35}{12}$$

2) $\angle G$

97

H

3) $\angle N$

L

8

PREVIEW

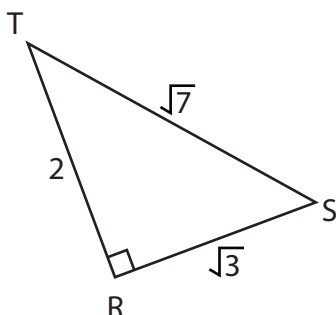
Gain complete access to the largest collection of worksheets in all subjects!

Members, please log in to download this worksheet.

Not a member? Please sign up to gain complete access.

www.mathworksheets4kids.com

4) $\angle T$



$$\csc T = \frac{\sqrt{21}}{3}$$

$$\sec T = \frac{\sqrt{7}}{2}$$

$$\cot T = \frac{2\sqrt{3}}{3}$$
