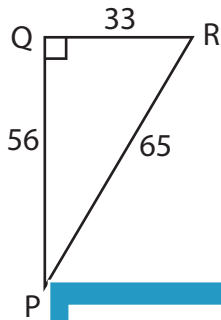


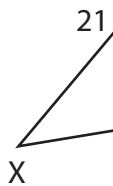
Trigonometric Ratios

Find all the three reciprocal trigonometric ratios for the mentioned angle.

1) $\angle P$



2) $\angle Z$



PREVIEW

Gain complete access to the largest collection of worksheets in all subjects!

Members, please log in to download this worksheet.

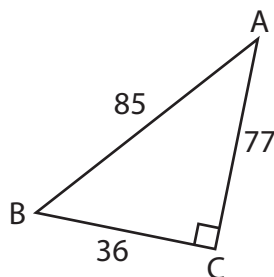
Not a member? Please sign up to gain complete access.

www.mathworksheets4kids.com

3) $\angle E$

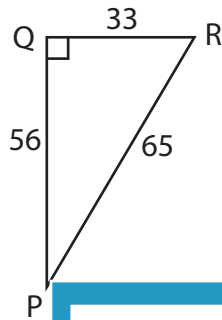


4) $\angle B$



Trigonometric Ratios

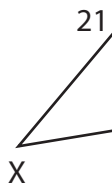
Find all the three reciprocal trigonometric ratios for the mentioned angle.

1) $\angle P$ 

$$\csc P = \frac{65}{33}$$

$$\sec P = \frac{65}{56}$$

$$\cot P = \frac{56}{33}$$

2) $\angle Z$ 

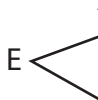
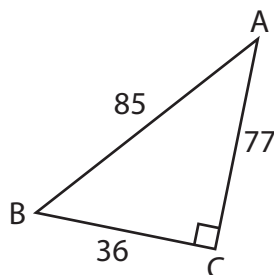
PREVIEW

Gain complete access to the largest collection of worksheets in all subjects!

Members, please log in to download this worksheet.

Not a member? Please sign up to gain complete access.

www.mathworksheets4kids.com

3) $\angle E$ 4) $\angle B$ 

$$\csc B = \frac{85}{77}$$

$$\sec B = \frac{85}{36}$$

$$\cot B = \frac{36}{77}$$
