

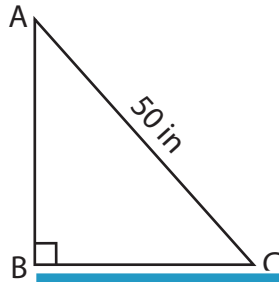
Name : _____

Trigonometric Ratios

L2S1

Find all the three reciprocal trigonometric ratios for the mentioned angle.

1) $\angle A$



2) $\angle X$



PREVIEW

Gain complete access to the largest collection of worksheets in all subjects!

Members, please log in to download this worksheet.

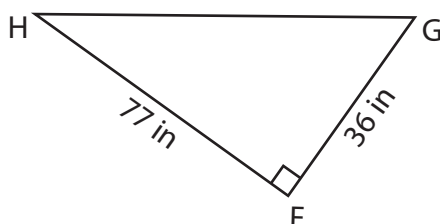
Not a member? Please sign up to gain complete access.

www.mathworksheets4kids.com

3) $\angle P$



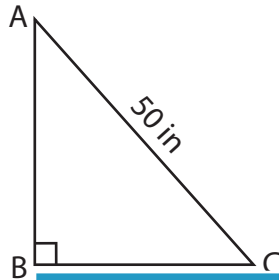
4) $\angle H$



Trigonometric Ratios

Find all the three reciprocal trigonometric ratios for the mentioned angle.

1) $\angle A$

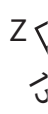


$\csc A = \frac{5}{3}$

$\sec A = \frac{5}{4}$

$\cot A = \frac{4}{3}$

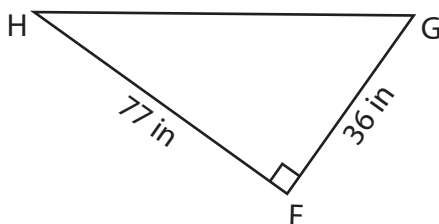
2) $\angle X$



3) $\angle P$



4) $\angle H$



$\csc H = \frac{85}{36}$

$\sec H = \frac{85}{77}$

$\cot H = \frac{77}{36}$

PREVIEW

Gain complete access to the largest collection of worksheets in all subjects!

Members, please log in to download this worksheet.

Not a member? Please sign up to gain complete access.

www.mathworksheets4kids.com