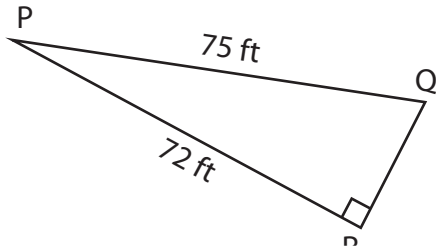


Trigonometric Ratios

Find all the three reciprocal trigonometric ratios for the mentioned angle.

1) $\angle Q$



2) $\angle M$

PREVIEW

Gain complete access to the largest collection of worksheets in all subjects!

Members, please log in to download this worksheet.

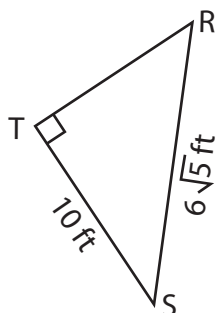
Not a member? Please sign up to gain complete access.

www.mathworksheets4kids.com

3) $\angle Z$



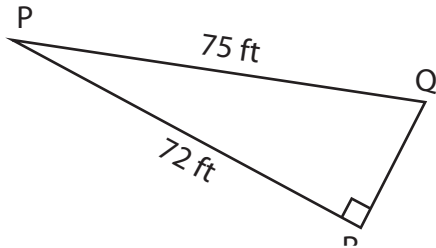
4) $\angle R$



Trigonometric Ratios

Find all the three reciprocal trigonometric ratios for the mentioned angle.

1) $\angle Q$



$$\csc Q = \frac{25}{24}$$

$$\sec Q = \frac{25}{7}$$

$$\cot Q = \frac{7}{24}$$

2) $\angle M$

L

3) $\angle Z$

X

PREVIEW

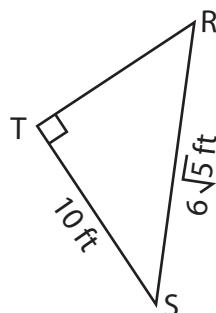
Gain complete access to the largest collection of worksheets in all subjects!

Members, please log in to download this worksheet.

Not a member? Please sign up to gain complete access.

www.mathworksheets4kids.com

4) $\angle R$



$$\csc R = \frac{3\sqrt{5}}{5}$$

$$\sec R = \frac{3}{2}$$

$$\cot R = \frac{2\sqrt{5}}{5}$$
