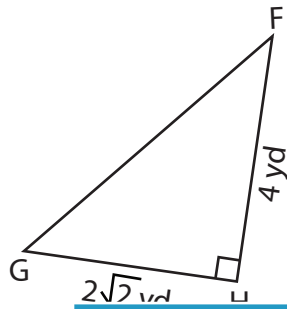


Trigonometric Ratios

Find all the three reciprocal trigonometric ratios for the mentioned angle.

1) $\angle F$



2) $\angle U$



PREVIEW

Gain complete access to the largest collection of worksheets in all subjects!

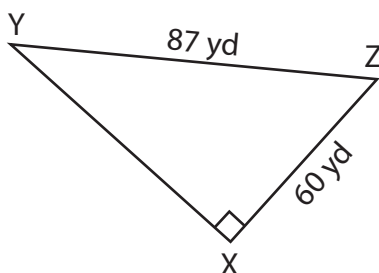
Members, please log in to download this worksheet.

Not a member? Please sign up to gain complete access.

www.mathworksheets4kids.com

3) $\angle S$

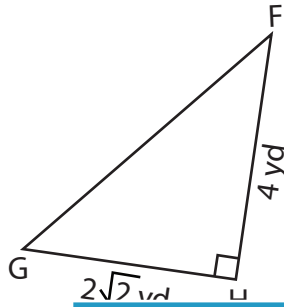
4) $\angle Y$



Trigonometric Ratios

Find all the three reciprocal trigonometric ratios for the mentioned angle.

1) $\angle F$



$\csc F = \sqrt{3}$

$\sec F = \frac{\sqrt{6}}{2}$

$\cot F = \sqrt{2}$

2) $\angle U$



3) $\angle S$



PREVIEW

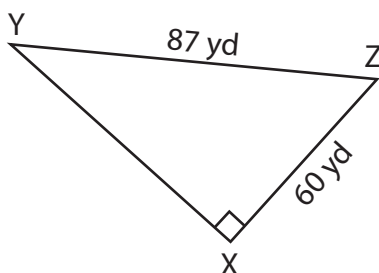
Gain complete access to the largest collection of worksheets in all subjects!

Members, please log in to download this worksheet.

Not a member? Please sign up to gain complete access.

www.mathworksheets4kids.com

4) $\angle Y$



$\csc Y = \frac{29}{20}$

$\sec Y = \frac{29}{21}$

$\cot Y = \frac{21}{20}$
