

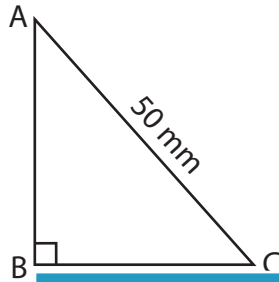
Name : _____

Trigonometric Ratios

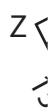
L2S1

Find all the three reciprocal trigonometric ratios for the mentioned angle.

1) $\angle A$



2) $\angle X$



PREVIEW
Gain complete access to the largest collection of worksheets in all subjects!

Members, please log in to download this worksheet.

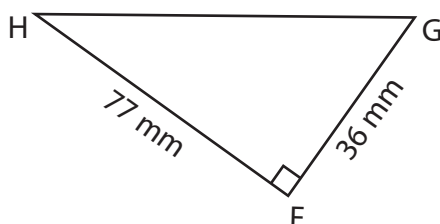
Not a member? Please sign up to gain complete access.

www.mathworksheets4kids.com

3) $\angle P$



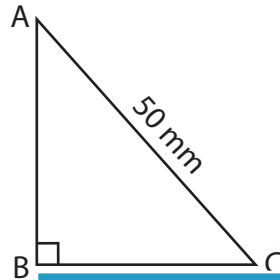
4) $\angle H$



Trigonometric Ratios

Find all the three reciprocal trigonometric ratios for the mentioned angle.

1) $\angle A$



$$\csc A = \frac{5}{3}$$

$$\sec A = \frac{5}{4}$$

$$\cot A = \frac{4}{3}$$

2) $\angle X$



3) $\angle P$

PREVIEW

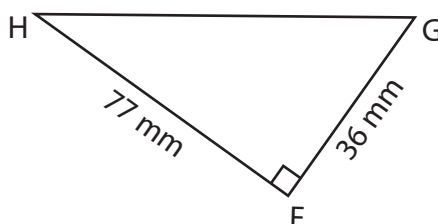
Gain complete access to the largest
collection of worksheets in all subjects!

Members, please
log in to
download this
worksheet.

Not a member?
Please sign up to
gain complete
access.

www.mathworksheets4kids.com

4) $\angle H$



$$\csc H = \frac{85}{36}$$

$$\sec H = \frac{85}{77}$$

$$\cot H = \frac{77}{36}$$
