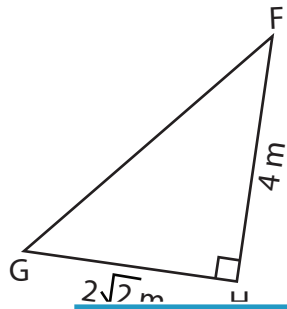


Trigonometric Ratios

Find all the three reciprocal trigonometric ratios for the mentioned angle.

1) $\angle F$



2) $\angle U$



PREVIEW

Gain complete access to the largest collection of worksheets in all subjects!

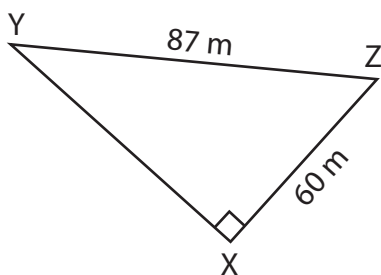
Members, please log in to download this worksheet.

Not a member? Please sign up to gain complete access.

www.mathworksheets4kids.com

3) $\angle S$

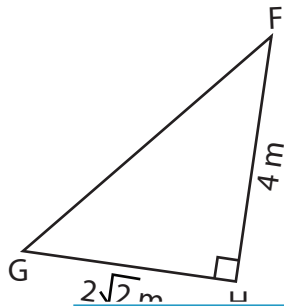
4) $\angle Y$



Trigonometric Ratios

Find all the three reciprocal trigonometric ratios for the mentioned angle.

1) $\angle F$



$$\csc F = \sqrt{3}$$

$$\sec F = \frac{\sqrt{6}}{2}$$

$$\cot F = \sqrt{2}$$

2) $\angle U$



3) $\angle S$

R

PREVIEW

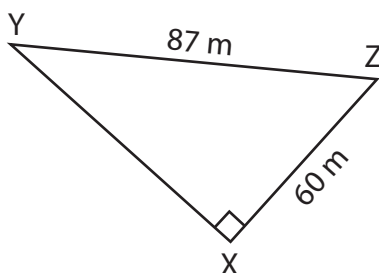
Gain complete access to the largest collection of worksheets in all subjects!

Members, please log in to download this worksheet.

Not a member? Please sign up to gain complete access.

www.mathworksheets4kids.com

4) $\angle Y$



$$\csc Y = \frac{29}{20}$$

$$\sec Y = \frac{29}{21}$$

$$\cot Y = \frac{21}{20}$$
