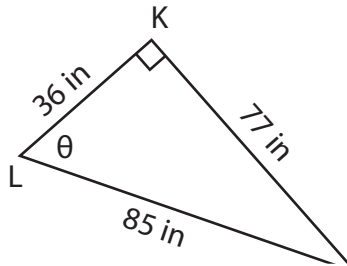


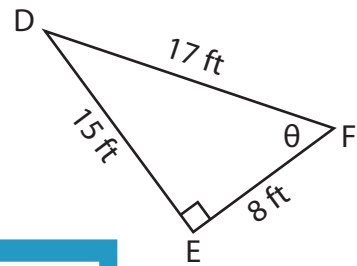
Trigonometric Ratios

Find the indicated trigonometric ratio.

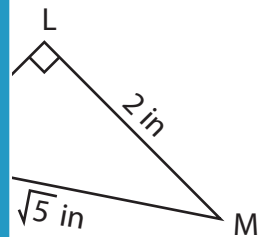
1) $\sec \theta$



2) $\operatorname{cosec} \theta$



3) $\cot \theta$



PREVIEW

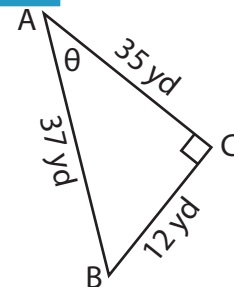
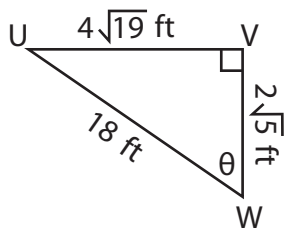
Gain complete access to the largest collection of worksheets in all subjects!

Members, please log in to download this worksheet.

Not a member? Please sign up to gain complete access.

www.mathworksheets4kids.com

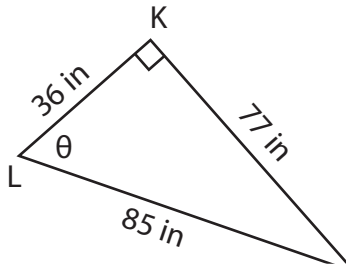
5) $\operatorname{cosec} \theta$



Trigonometric Ratios

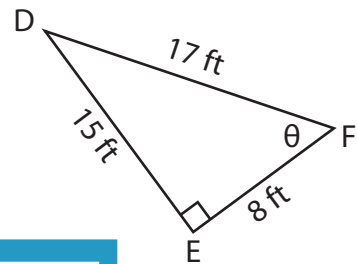
Find the indicated trigonometric ratio.

1) $\sec \theta$



$\frac{85}{36}$

2) $\operatorname{cosec} \theta$

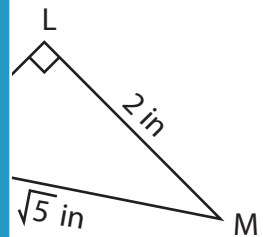


$\frac{7}{5}$

3) $\cot \theta$

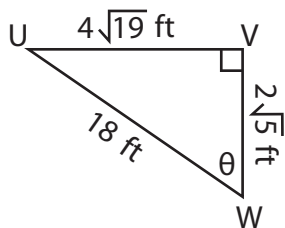


$\frac{12}{5}$

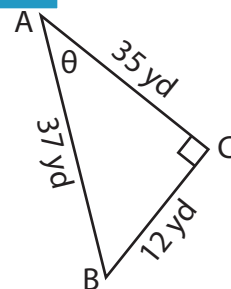


$\frac{1}{5}$

5) $\operatorname{cosec} \theta$



$\frac{9\sqrt{19}}{38}$



$\frac{35}{12}$

PREVIEW

Gain complete access to the largest collection of worksheets in all subjects!

Members, please log in to download this worksheet.

Not a member? Please sign up to gain complete access.

www.mathworksheets4kids.com