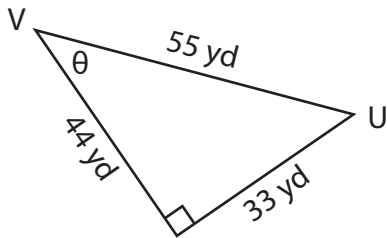


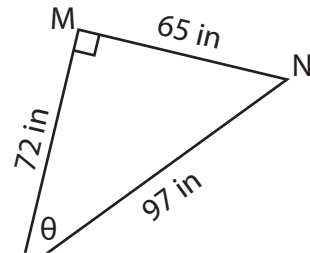
Trigonometric Ratios

Find the indicated trigonometric ratio.

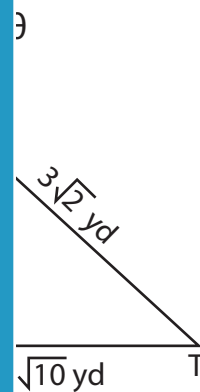
1) cosec θ



2) cot θ



3) sec θ



PREVIEW

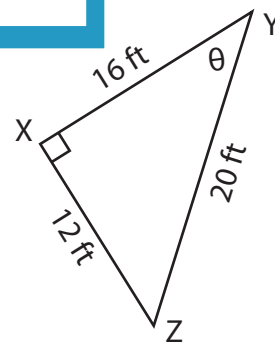
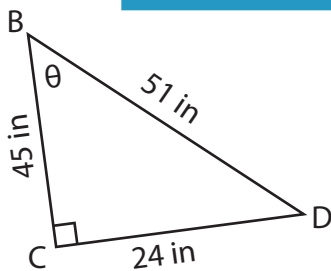
Gain complete access to the largest collection of worksheets in all subjects!

Members, please log in to download this worksheet.

Not a member? Please sign up to gain complete access.

www.mathworksheets4kids.com

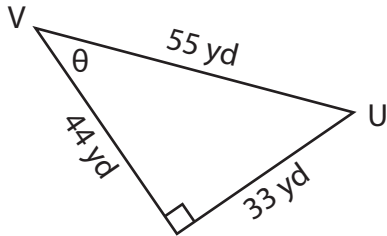
5) cot θ



Trigonometric Ratios

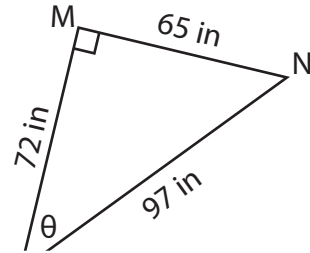
Find the indicated trigonometric ratio.

1) cosec θ



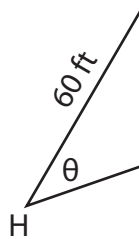
 $\frac{5}{3}$

2) cot θ

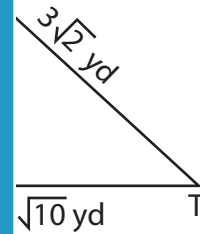


 $\frac{2}{5}$

3) sec θ

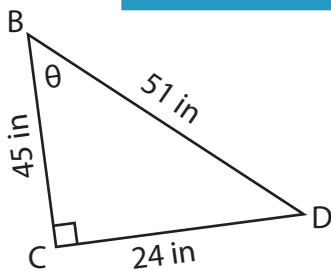


 $\frac{13}{12}$

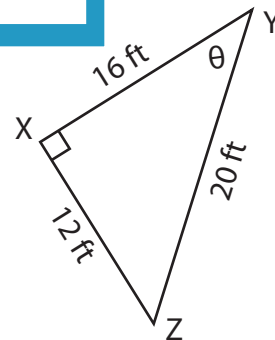


 $\frac{\sqrt{5}}{5}$

5) cot θ



 $\frac{15}{8}$



 $\frac{5}{4}$

PREVIEW

Gain complete access to the largest collection of worksheets in all subjects!

Members, please log in to download this worksheet.

Not a member? Please sign up to gain complete access.

www.mathworksheets4kids.com