

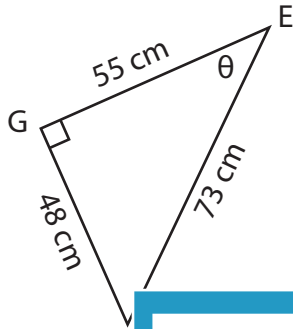
Name : \_\_\_\_\_

# Trigonometric Ratios

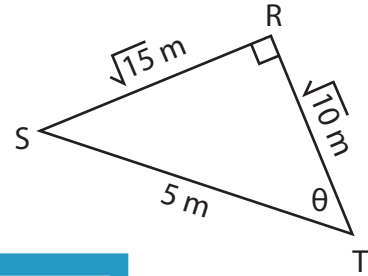
Lengths: S2

Find the indicated trigonometric ratio.

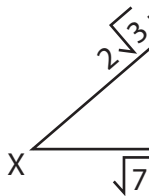
1)  $\cot \theta$



2)  $\sec \theta$



3)  $\operatorname{cosec} \theta$

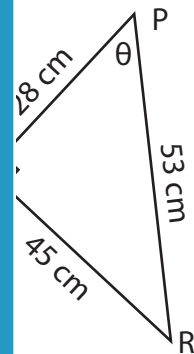


Gain complete access to the largest collection of worksheets in all subjects!

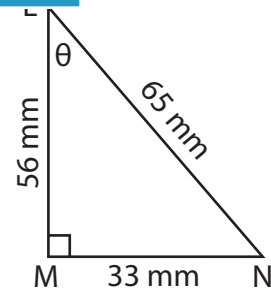
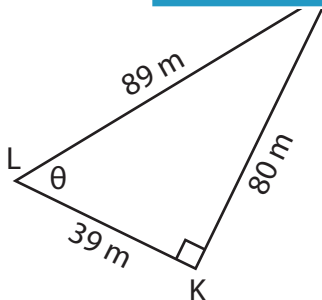
Members, please log in to download this worksheet.

Not a member? Please sign up to gain complete access.

[www.mathworksheets4kids.com](http://www.mathworksheets4kids.com)



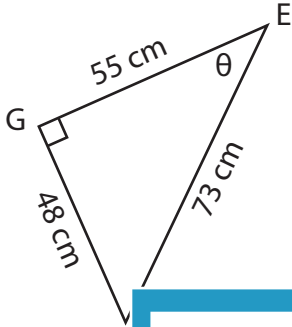
5)  $\sec \theta$



**Trigonometric Ratios**

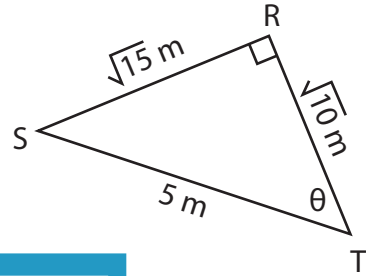
Find the indicated trigonometric ratio.

1)  $\cot \theta$



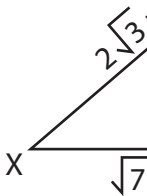
$\frac{55}{48}$

2)  $\sec \theta$



$\frac{10}{2}$

3)  $\operatorname{cosec} \theta$



$\frac{2\sqrt{2}}{7}$

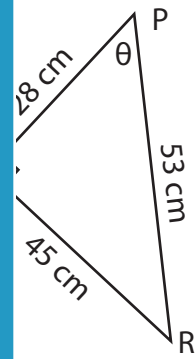
**PREVIEW**

Gain complete access to the largest collection of worksheets in all subjects!

Members, please log in to download this worksheet.

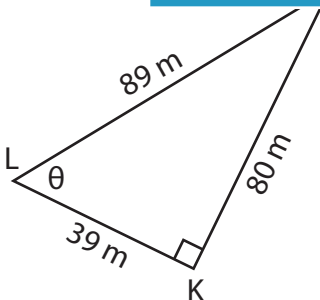
Not a member? Please sign up to gain complete access.

[www.mathworksheets4kids.com](http://www.mathworksheets4kids.com)

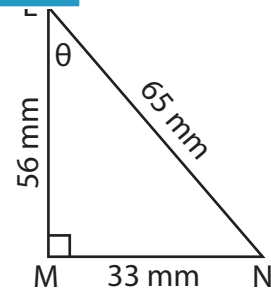


$\frac{8}{5}$

5)  $\sec \theta$



$\frac{89}{39}$



$\frac{65}{33}$