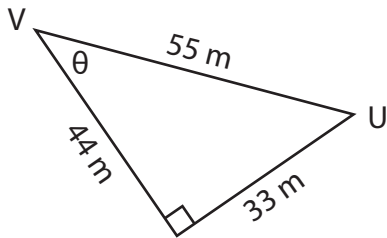


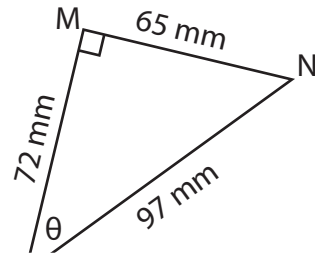
Trigonometric Ratios

Find the indicated trigonometric ratio.

1) cosec θ



2) cot θ



3) sec θ

PREVIEW

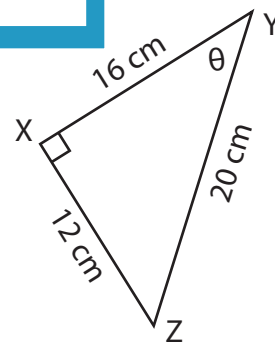
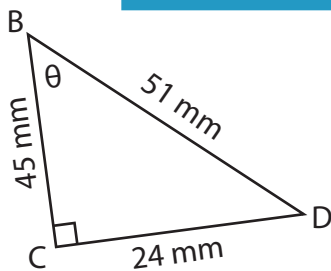
Gain complete access to the largest collection of worksheets in all subjects!

Members, please log in to download this worksheet.

Not a member? Please sign up to gain complete access.

www.mathworksheets4kids.com

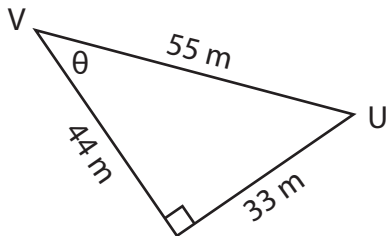
5) cot θ



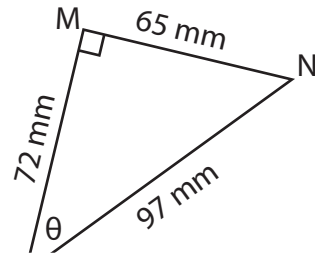
Trigonometric Ratios

Find the indicated trigonometric ratio.

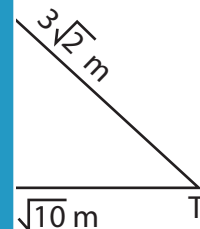
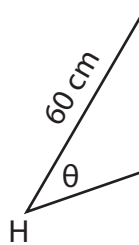
1) cosec θ



2) cot θ



3) sec θ



PREVIEW

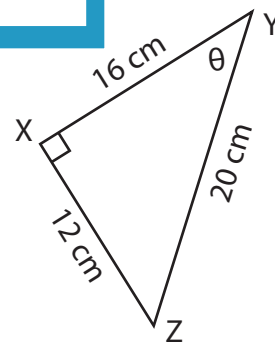
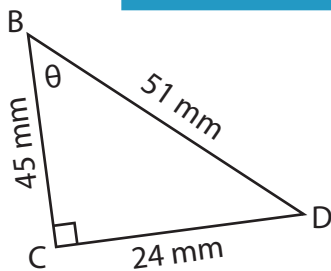
Gain complete access to the largest collection of worksheets in all subjects!

Members, please log in to download this worksheet.

Not a member? Please sign up to gain complete access.

www.mathworksheets4kids.com

5) cot θ



$\frac{15}{8}$

$\frac{5}{4}$