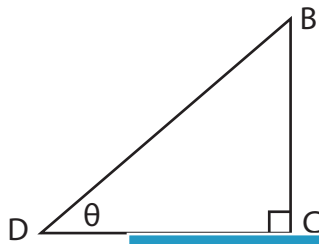


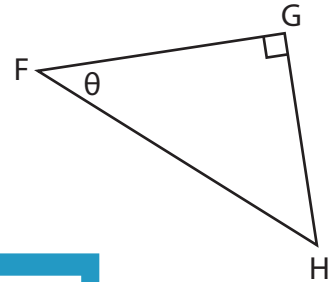
Trigonometric Ratios

Find each trigonometric ratio using segments.

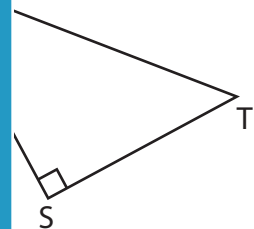
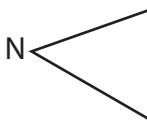
1) $\cot \theta$



2) $\sec \theta$



3) $\operatorname{cosec} \theta$



PREVIEW

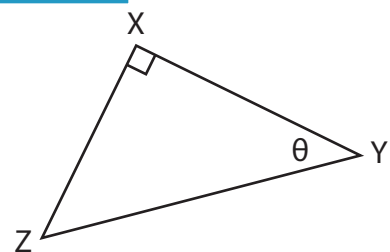
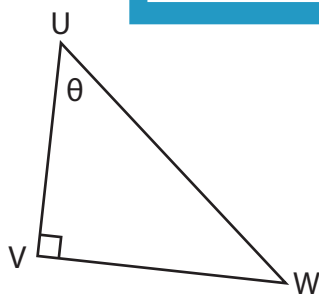
Gain complete access to the largest collection of worksheets in all subjects!

Members, please log in to download this worksheet.

Not a member? Please sign up to gain complete access.

www.mathworksheets4kids.com

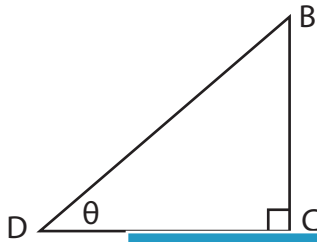
5) $\sec \theta$



Trigonometric Ratios

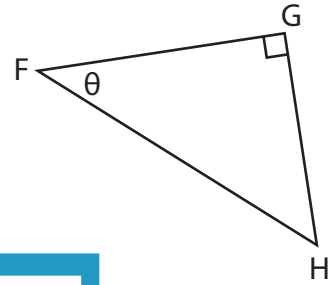
Find each trigonometric ratio using segments.

1) $\cot \theta$



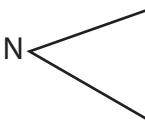
$\frac{CD}{BC}$

2) $\sec \theta$

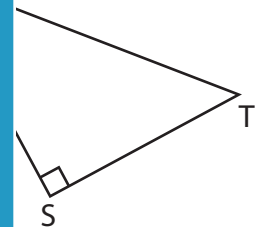


$\frac{FH}{FG}$

3) $\operatorname{cosec} \theta$

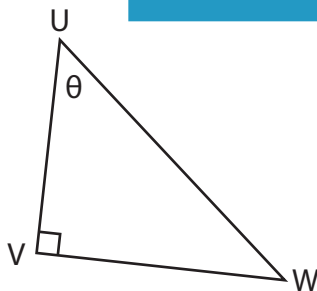


$\frac{ML}{MN}$

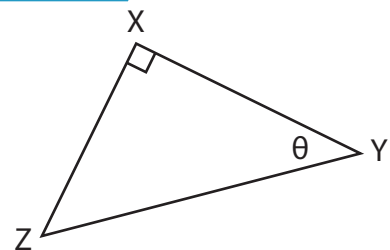


$\frac{TU}{ST}$

5) $\sec \theta$



$\frac{UW}{UV}$



$\frac{XZ}{XY}$

PREVIEW

Gain complete access to the largest collection of worksheets in all subjects!

Members, please log in to download this worksheet.

Not a member? Please sign up to gain complete access.

www.mathworksheets4kids.com