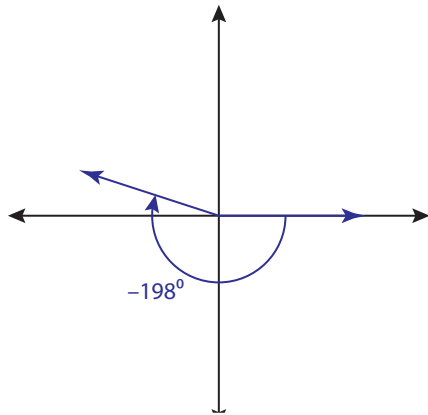


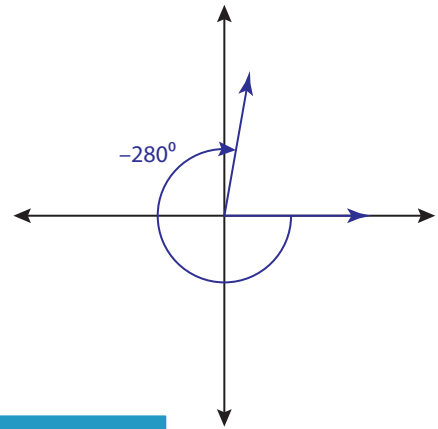
# Coterminal Angles - Degrees

Find the coterminal angle between  $0^\circ$  and  $360^\circ$  for each angle.

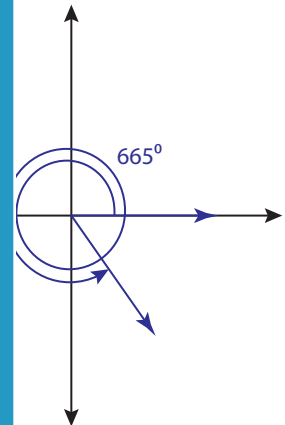
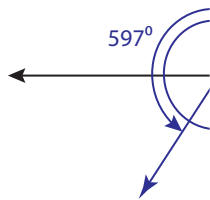
1)



2)



3)



## PREVIEW

Gain complete access to the largest collection of worksheets in all subjects!

Members, please log in to download this worksheet.

Not a member? Please sign up to gain complete access.

[www.mathworksheets4kids.com](http://www.mathworksheets4kids.com)

5)

$-284^\circ$

6)

$391^\circ$

7)

$-395^\circ$

\_\_\_\_\_

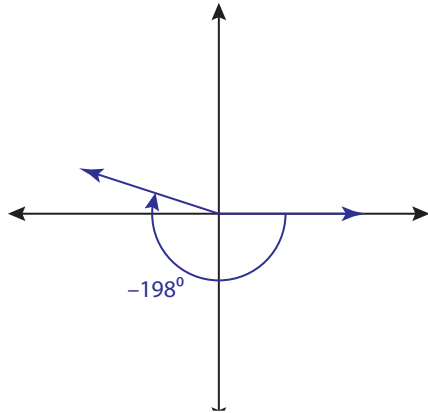
\_\_\_\_\_

\_\_\_\_\_

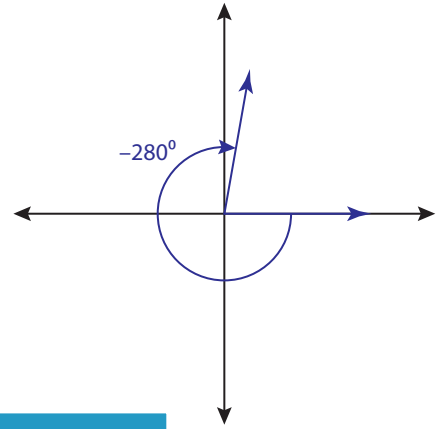
**Coterminal Angles - Degrees**

Find the coterminal angle between  $0^\circ$  and  $360^\circ$  for each angle.

1)



2)




**162°**

**PREVIEW**

**80°**

3)



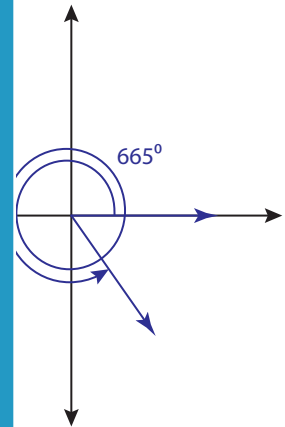
**231°**

Gain complete access to the largest collection of worksheets in all subjects!

Members, please log in to download this worksheet.

Not a member? Please sign up to gain complete access.

[www.mathworksheets4kids.com](http://www.mathworksheets4kids.com)



**305°**

5)

$-284^\circ$

**76°**

6)

$391^\circ$

**31°**

7)

$-395^\circ$

**325°**