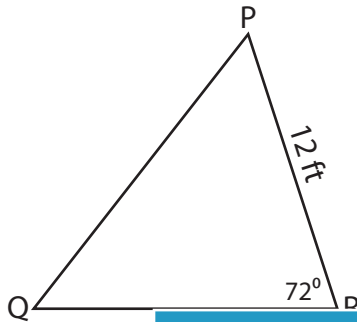


Name : \_\_\_\_\_

# Area of a Triangle

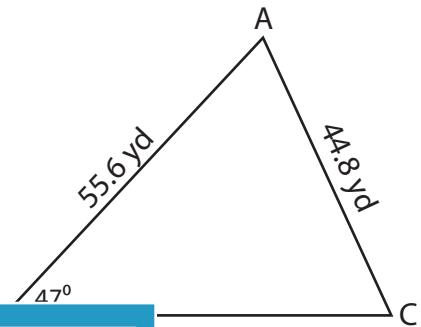
Find the area of each triangle. Round your answer to two decimal places.

1)



Area = \_\_\_\_\_

2)

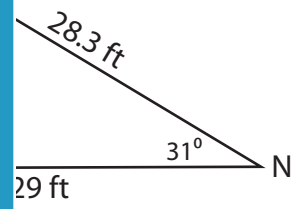


\_\_\_\_\_

3)



Area = \_\_\_\_\_



\_\_\_\_\_

**PREVIEW**

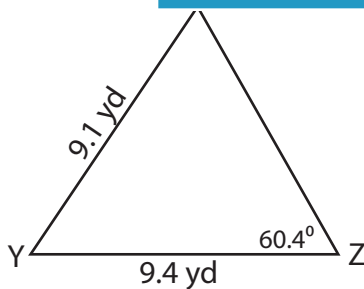
Gain complete access to the largest collection of worksheets in all subjects!

Members, please log in to download this worksheet.

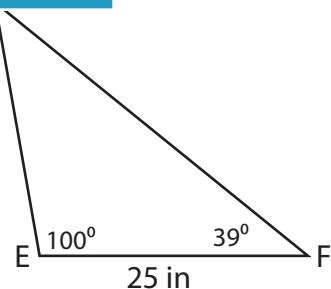
Not a member? Please sign up to gain complete access.

[www.mathworksheets4kids.com](http://www.mathworksheets4kids.com)

5)



Area = \_\_\_\_\_



Area = \_\_\_\_\_

Name : \_\_\_\_\_

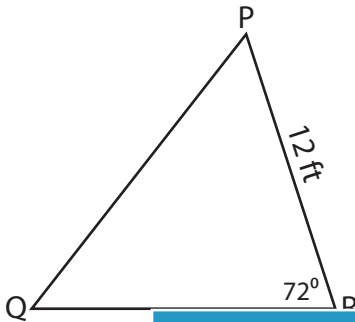
## Answer key

Sheet 1

### Area of a Triangle

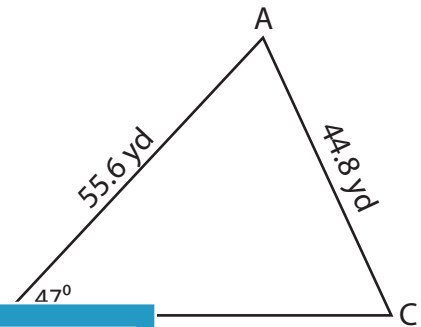
Find the area of each triangle. Round your answer to two decimal places.

1)



Area = \_\_\_\_\_

2)



Area =                      **1,153.11 yd<sup>2</sup>**

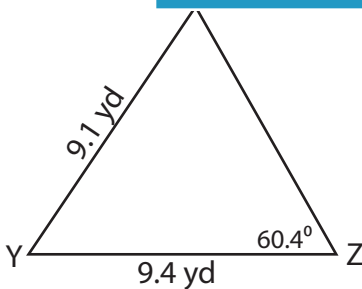
3)



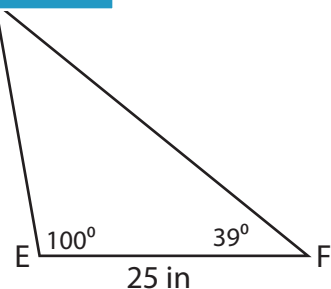
Area = \_\_\_\_\_

Area =                      **211.35 ft<sup>2</sup>**

5)



Area =                      **35.32 yd<sup>2</sup>**



Area =                      **295.21 in<sup>2</sup>**

**PREVIEW**

Gain complete access to the largest collection of worksheets in all subjects!

Members, please log in to download this worksheet.

Not a member? Please sign up to gain complete access.

[www.mathworksheets4kids.com](http://www.mathworksheets4kids.com)