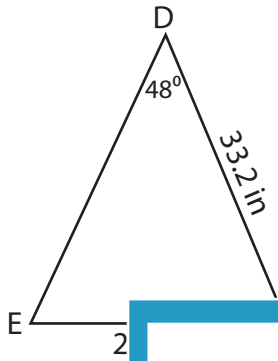


Name : \_\_\_\_\_

# Area of a Triangle

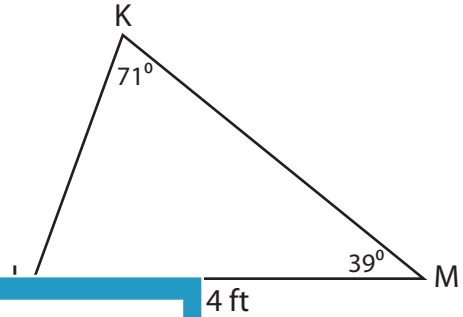
Find the area of each triangle. Round your answer to two decimal places.

1)



Area = \_\_\_\_\_

2)

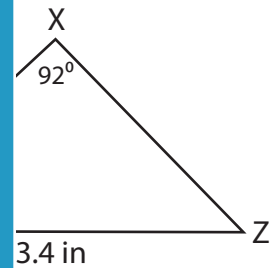


Area = \_\_\_\_\_

3)



Area = \_\_\_\_\_



Area = \_\_\_\_\_

**PREVIEW**

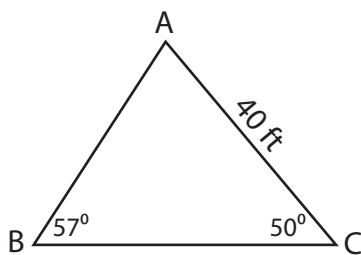
Gain complete access to the largest collection of worksheets in all subjects!

Members, please log in to download this worksheet.

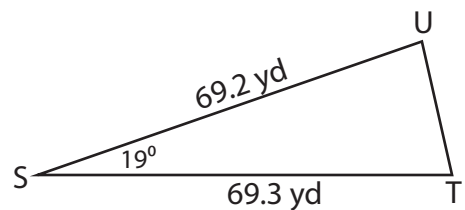
Not a member? Please sign up to gain complete access.

[www.mathworksheets4kids.com](http://www.mathworksheets4kids.com)

5)



Area = \_\_\_\_\_



Area = \_\_\_\_\_

Name : \_\_\_\_\_

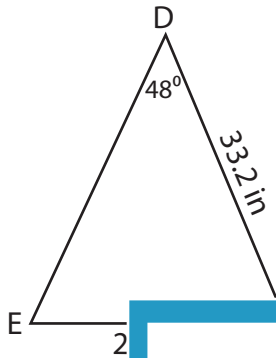
## Answer key

Sheet 3

### Area of a Triangle

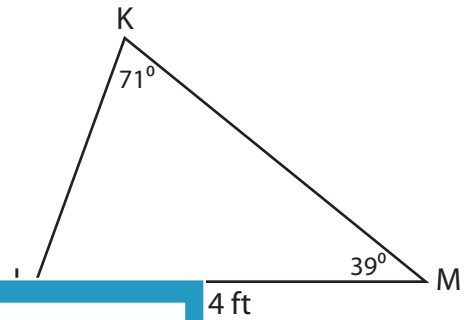
Find the area of each triangle. Round your answer to two decimal places.

1)



Area = \_\_\_\_\_

2)



**61.29 ft<sup>2</sup>**

3)



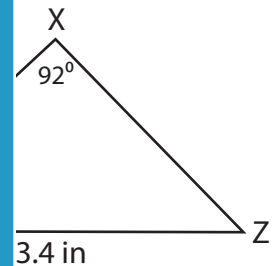
Area = \_\_\_\_\_

Gain complete access to the largest collection of worksheets in all subjects!

Members, please log in to download this worksheet.

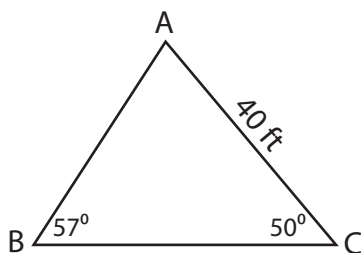
Not a member? Please sign up to gain complete access.

[www.mathworksheets4kids.com](http://www.mathworksheets4kids.com)

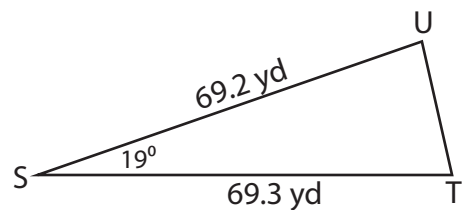


**1,676.28 in<sup>2</sup>**

5)



Area = **698.79 ft<sup>2</sup>**



Area = **780.64 yd<sup>2</sup>**