

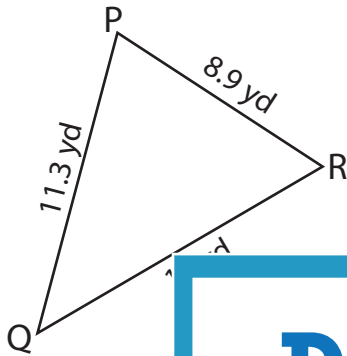
Name : _____

T1S3

Solving Triangles

Solve each triangle from the given measurements. Round your answer to the nearest tenth.

1)

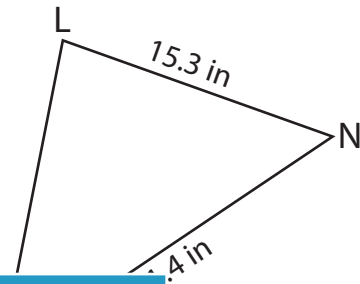


$m\angle P =$ _____

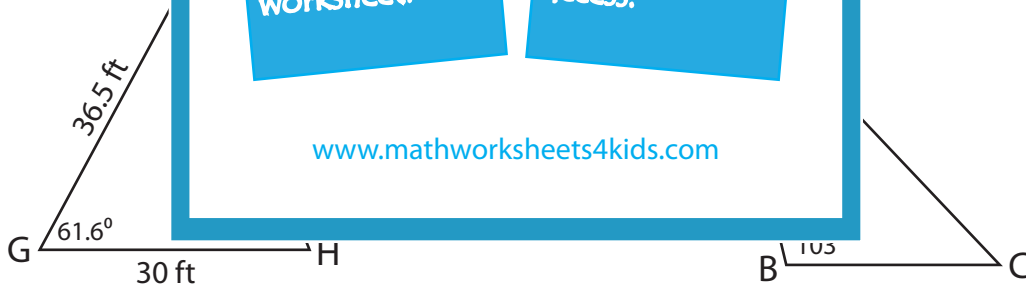
$m\angle Q =$ _____

$m\angle R =$ _____

2)



3)



$m\angle F =$ _____

$m\angle H =$ _____

$g =$ _____

$m\angle C =$ _____

$a =$ _____

$b =$ _____

PREVIEW

Gain complete access to the largest collection of worksheets in all subjects!

Members, please log in to download this worksheet.

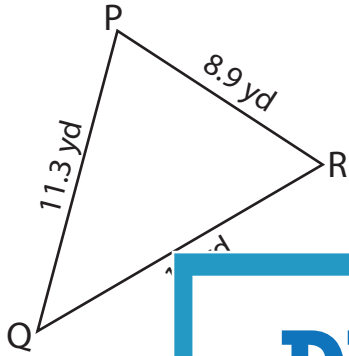
Not a member? Please sign up to gain complete access.

www.mathworksheets4kids.com

Solving Triangles

Solve each triangle from the given measurements. Round your answer to the nearest tenth.

1)

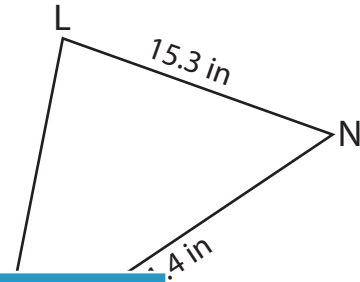


$m\angle P =$ _____

$m\angle Q =$ _____

$m\angle R =$ _____

2)

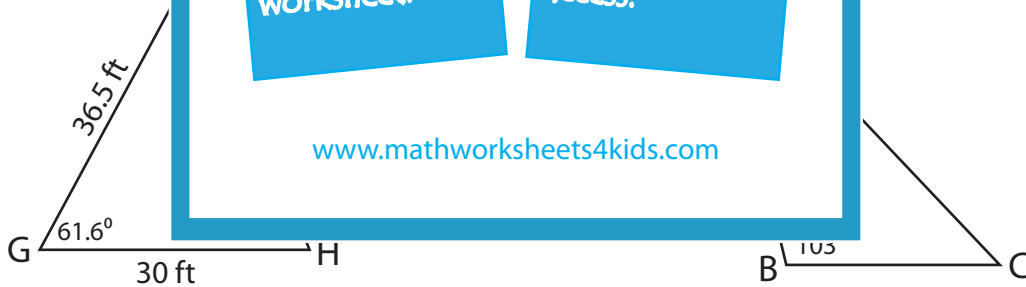


$m\angle N =$ **81.5°**

$m\angle M =$ **53.5°**

$m\angle L =$ **17.4 in**

3)



$m\angle F =$ **49.9°**

$m\angle H =$ **68.5°**

$g =$ **34.5 ft**

$m\angle C =$ **47°**

$a =$ **41 yd**

$b =$ **79.9 yd**

PREVIEW

Gain complete access to the largest collection of worksheets in all subjects!

Members, please log in to download this worksheet.

Not a member? Please sign up to gain complete access.

www.mathworksheets4kids.com