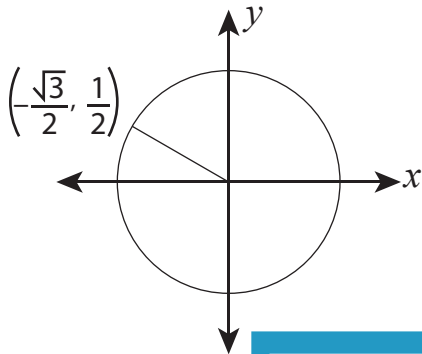


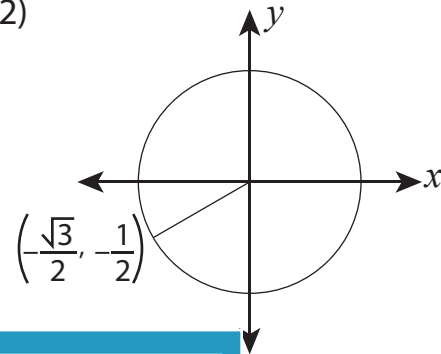
# Finding Angles

Use the unit circle to find the measure of angle formed by the terminal side.

1)



2)



# PREVIEW

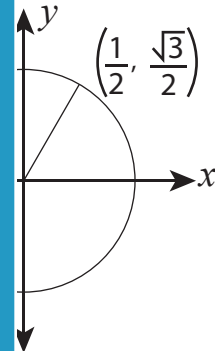
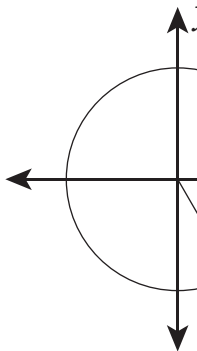
Gain complete access to the largest  
collection of worksheets in all subjects!

Members, please  
log in to  
download this  
worksheet.

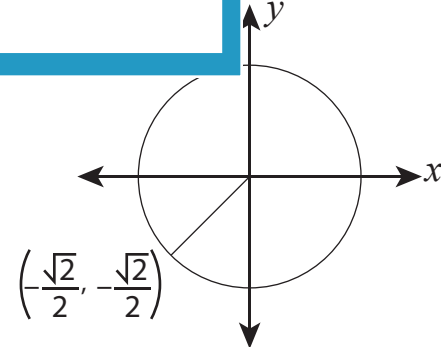
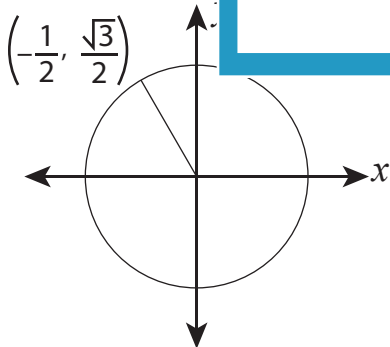
Not a member?  
Please sign up to  
gain complete  
access.

[www.mathworksheets4kids.com](http://www.mathworksheets4kids.com)

3)



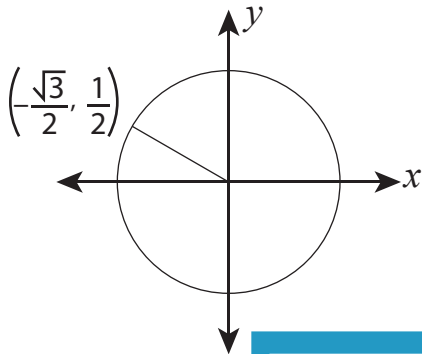
5)



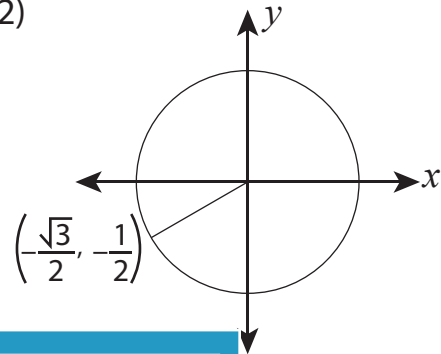
## Finding Angles

Use the unit circle to find the measure of angle formed by the terminal side.

1)

 $150^\circ$  or

2)

or  $\frac{7\pi}{6}$ 

# PREVIEW

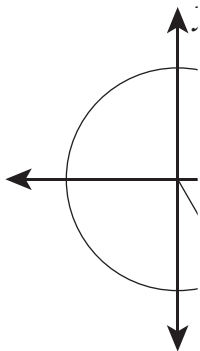
Gain complete access to the largest  
collection of worksheets in all subjects!

Members, please  
log in to  
download this  
worksheet.

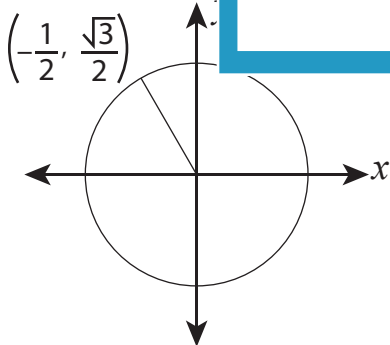
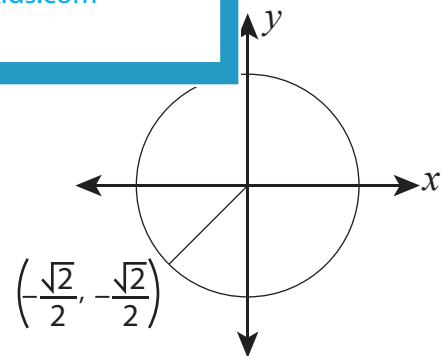
Not a member?  
Please sign up to  
gain complete  
access.

[www.mathworksheets4kids.com](http://www.mathworksheets4kids.com)

3)

 $300^\circ$  oror  $\frac{\pi}{3}$ 

5)

 $120^\circ$  or  $\frac{2\pi}{3}$  $225^\circ$  or  $\frac{5\pi}{4}$