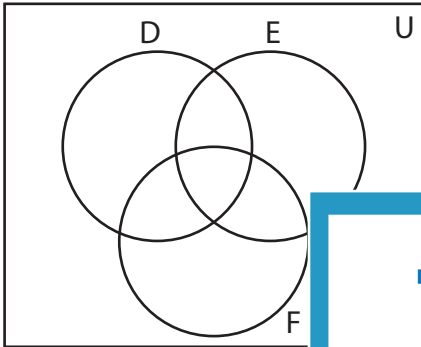


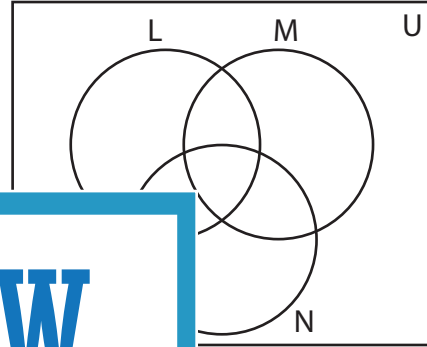
Venn Diagram

Complete the Venn diagram.

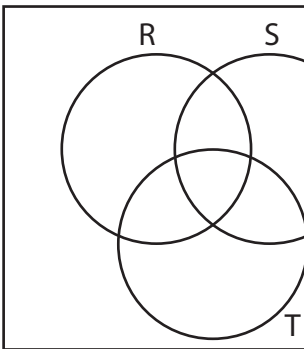
- 1) $U = \{21, 29, 32, 35, 38, 39, 46\}$
 $D = \{35, 38, 39, 46\}$
 $E = \{21, 32, 39, 46\}$
 $F = \{21, 29, 35, 39\}$



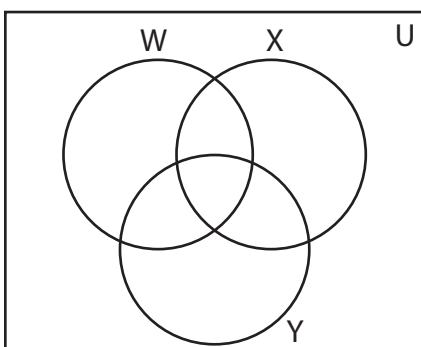
- 2) $U = \{5, 8, 13, 17, 20, 24, 26, 37, 49\}$
 $L = \{5, 8, 13, 17, 49\}$
 $M = \{13, 17, 24, 26, 49\}$
 $N = \{8, 17, 24, 37, 49\}$




- 3) $U = \{1, 6, 18, 25, 30, 34, 36, 43, 48, 50\}$
 $R = \{1, 18, 25, 34, 36, 48\}$
 $S = \{18, 30, 36, 50\}$
 $T = \{18, 34, 43, 50\}$



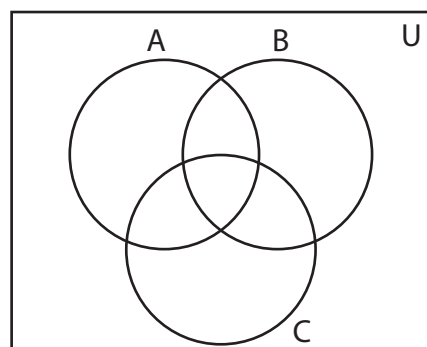
- 5) $U = \{3, 7, 10, 14, 27, 31, 33, 40, 41, 42, 47\}$
 $W = \{3, 27, 44\}$
 $X = \{10, 27, 31\}$
 $Y = \{3, 14, 31\}$



- $G = \{33, 40, 41, 42, 47\}$
 $H = \{47\}$



- $B = \{2, 7, 9, 15, 17, 43\}$
 $C = \{2, 7, 9, 15, 19, 49\}$



PREVIEW

Gain complete access to the largest collection of worksheets in all subjects!

Members, please log in to download this worksheet.

Not a member? Please sign up to gain complete access.

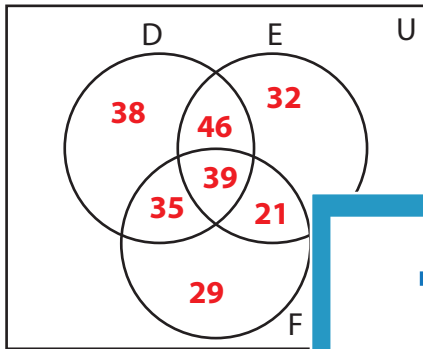
www.mathworksheets4kids.com

Answer key

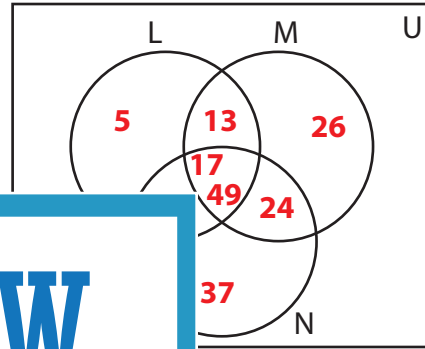
Venn Diagram

Complete the Venn diagram.

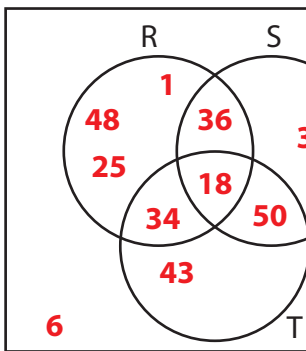
- 1) $U = \{21, 29, 32, 35, 38, 39, 46\}$
 $D = \{35, 38, 39, 46\}$
 $E = \{21, 32, 39, 46\}$
 $F = \{21, 29, 35, 39\}$



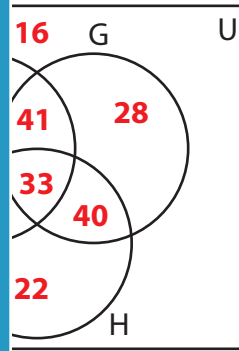
- 2) $U = \{5, 8, 13, 17, 20, 24, 26, 37, 49\}$
 $L = \{5, 8, 13, 17, 49\}$
 $M = \{13, 17, 24, 26, 49\}$
 $N = \{8, 17, 24, 37, 49\}$



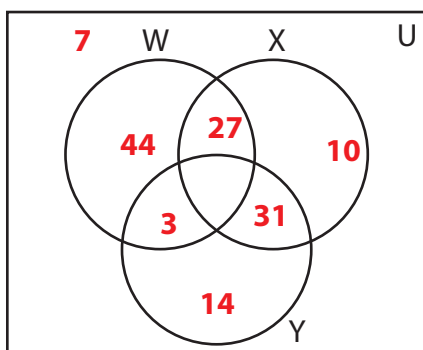
- 3) $U = \{1, 6, 18, 25, 30, 34, 48\}$
 $R = \{1, 18, 25, 34, 36, 48\}$
 $S = \{18, 30, 36, 50\}$
 $T = \{18, 34, 43, 50\}$



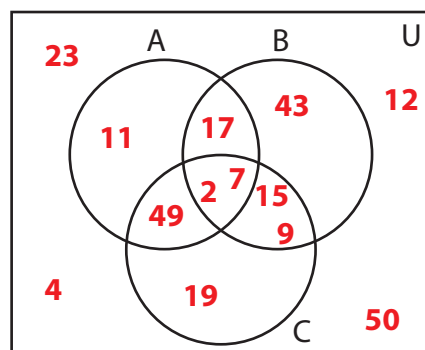
- $G = \{16, 28, 33, 40, 41, 42, 47\}$
 $H = \{16, 22, 33, 40, 41, 47\}$



- 5) $U = \{3, 7, 10, 14, 27, 31, 44\}$
 $W = \{3, 27, 44\}$
 $X = \{10, 27, 31\}$
 $Y = \{3, 14, 31\}$



- $B = \{2, 7, 9, 15, 17, 43\}$
 $C = \{2, 7, 9, 15, 19, 49\}$



PREVIEW

Gain complete access to the largest collection of worksheets in all subjects!

Members, please log in to download this worksheet.

Not a member? Please sign up to gain complete access.

www.mathworksheets4kids.com