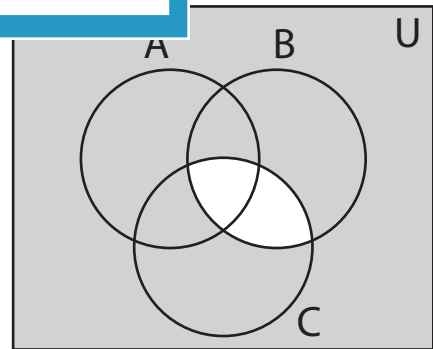
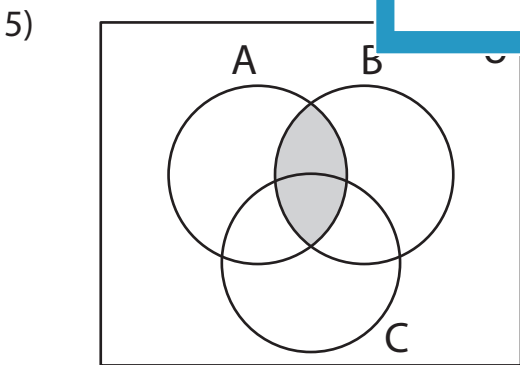
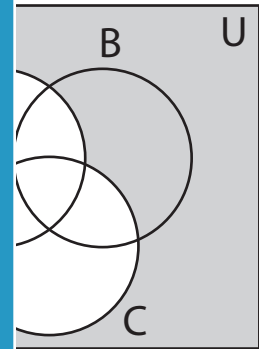
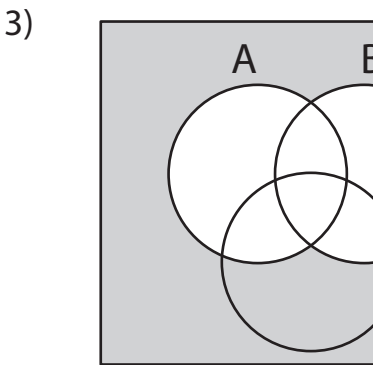
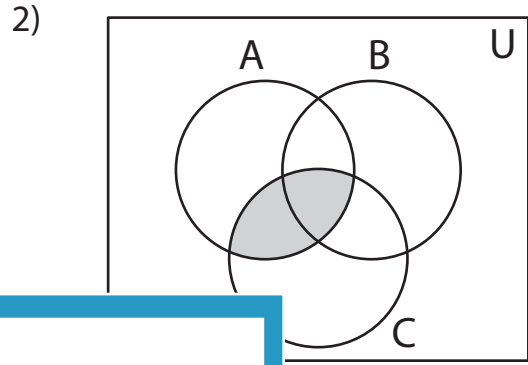
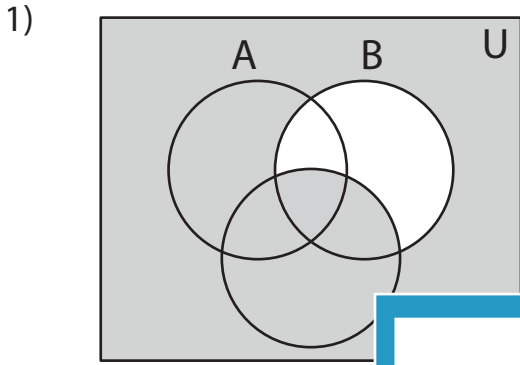


**Venn Diagram**

Determine the shaded region.



**PREVIEW**

Gain complete access to the largest collection of worksheets in all subjects!

Members, please log in to download this worksheet.

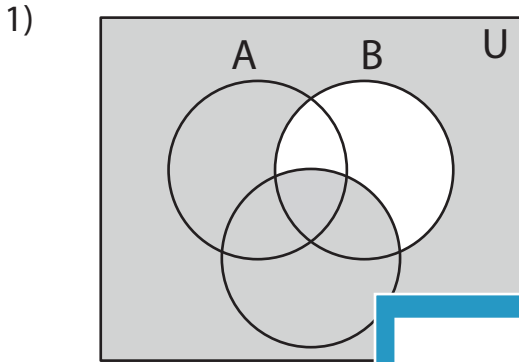
Not a member? Please sign up to gain complete access.

[www.mathworksheets4kids.com](http://www.mathworksheets4kids.com)

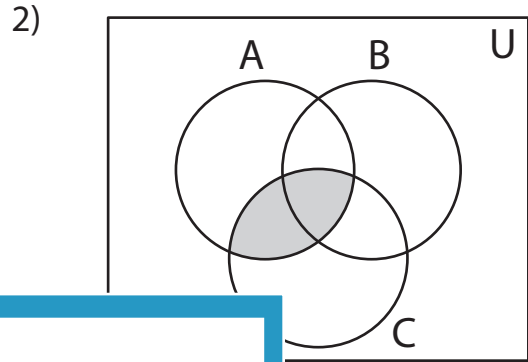
**Answer key**

**Venn Diagram**

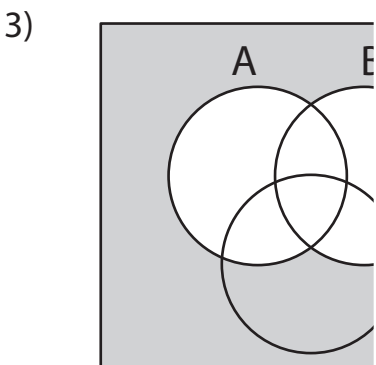
Determine the shaded region.



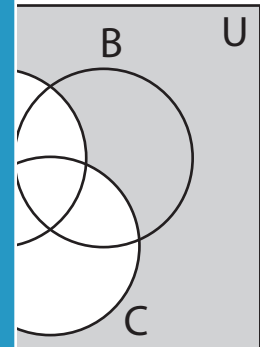
$(B \cap C)', (B' \cup C), (A \cup B)'$



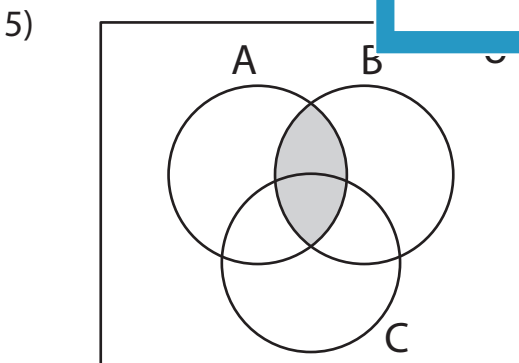
$(A \cap B), (A - C) \text{ or } (C - A)$



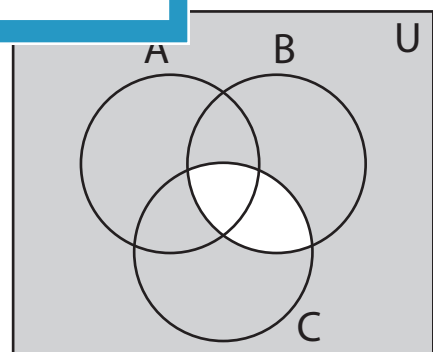
$(A \cup B)', (A' \cap B'), (A \cap B)$



$(A' \cap B'), (A' - C) \text{ or } (C' - A)$



$(A \cap B), (A' \cup B)', (A - B)' \text{ or } (B - A)'$



$(B' \cup C'), (B \cap C)', (B - C)' \text{ or } (C - B)'$

**PREVIEW**

Gain complete access to the largest collection of worksheets in all subjects!

Members, please log in to download this worksheet.

Not a member? Please sign up to gain complete access.

[www.mathworksheets4kids.com](http://www.mathworksheets4kids.com)