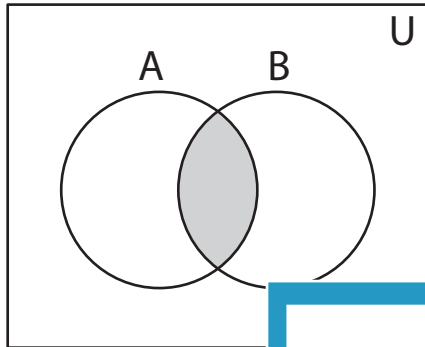


**Venn Diagram**

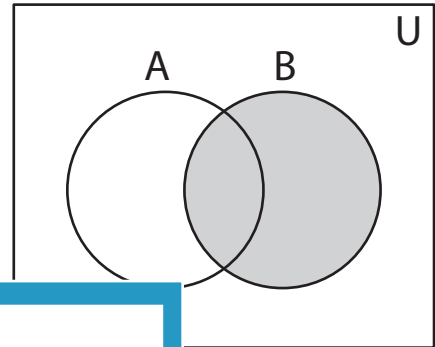
Sheet 2

Determine the shaded region.

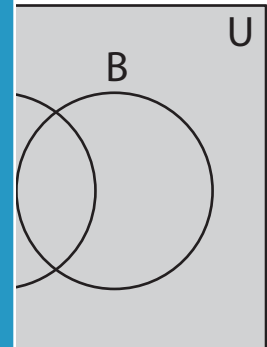
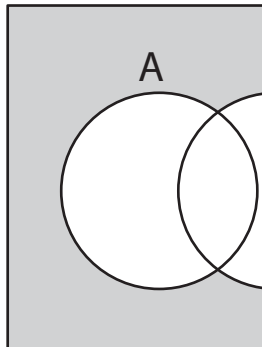
1)



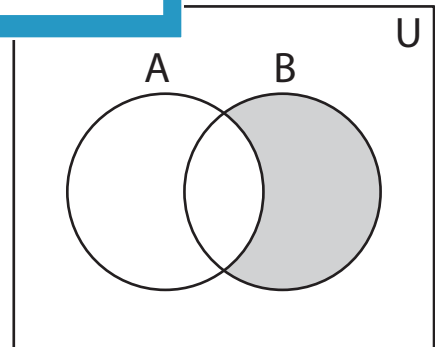
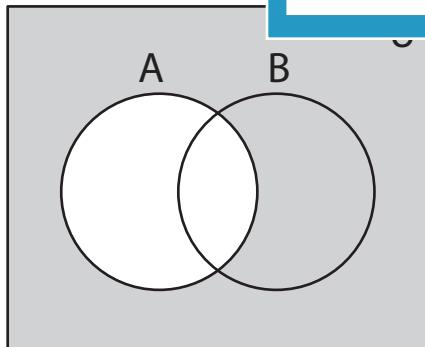
2)



3)



5)



# PREVIEW

Gain complete access to the largest  
collection of worksheets in all subjects!

Members, please  
log in to  
download this  
worksheet.

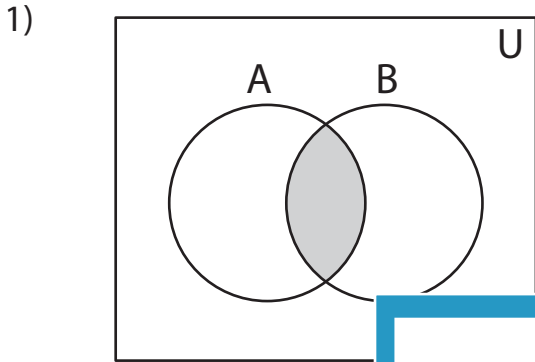
Not a member?  
Please sign up to  
gain complete  
access.

[www.mathworksheets4kids.com](http://www.mathworksheets4kids.com)

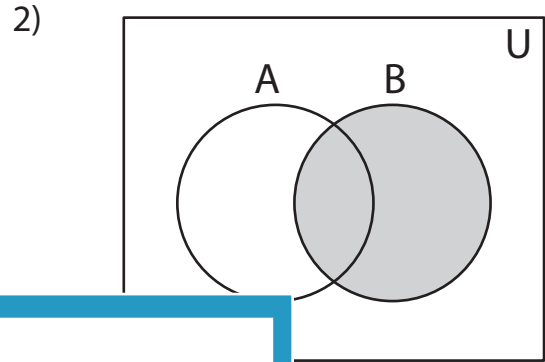
**Answer key**

**Venn Diagram**

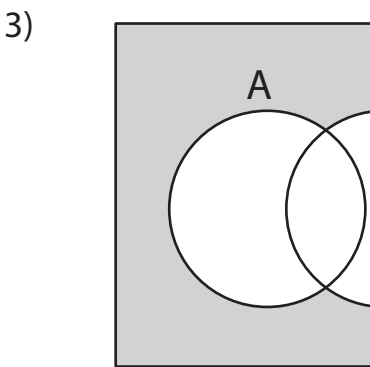
Determine the shaded region.



$(A \cap B), (A' \cup B')$



$B$



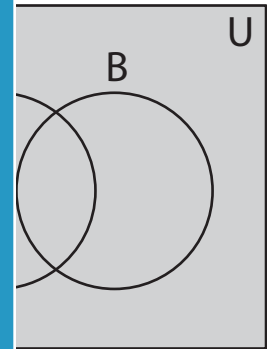
$(A' - B), (A' \cap B'), (A' \cup B)$

**PREVIEW**  
Gain complete access to the largest collection of worksheets in all subjects!

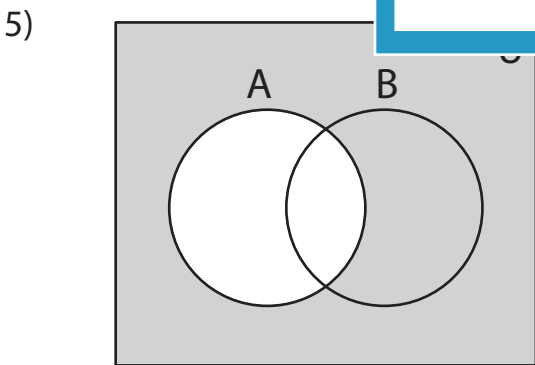
Members, please log in to download this worksheet.

Not a member? Please sign up to gain complete access.

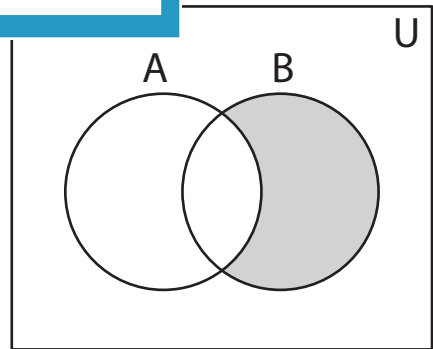
[www.mathworksheets4kids.com](http://www.mathworksheets4kids.com)



$(A \cup B) \cap A'$  or  $(B \cup B')$



$A'$



$(A' - B'), (A' \cap B), (A \cup B)'$  or  $(B - A)$