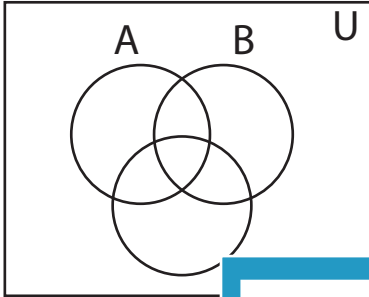


Shading - Venn Diagram

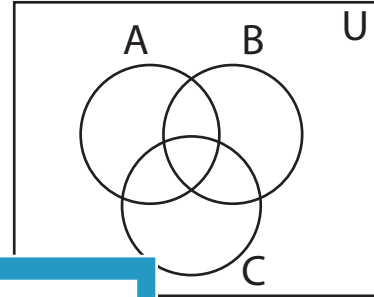
L1S1

Shade the given region.

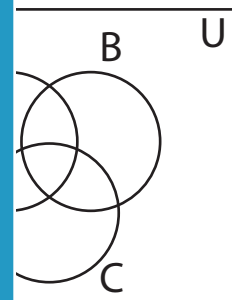
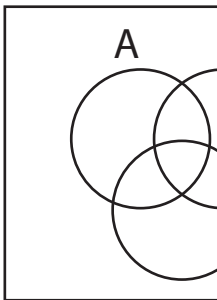
1) $(B \cup C)'$



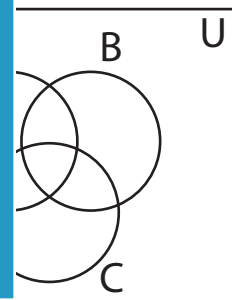
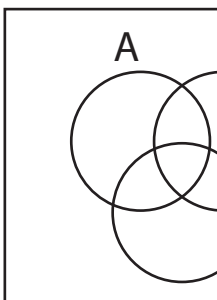
2) $A' \cup C'$



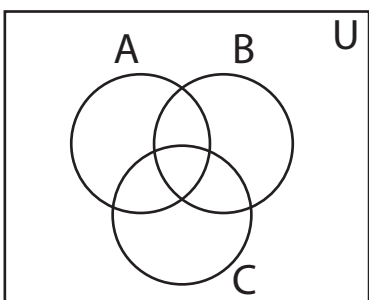
3) $A' \cap B'$



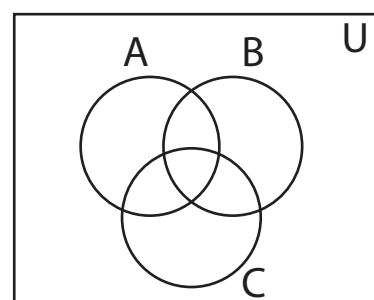
5) $A \cup C$



7) C



8) $A' \cup C$



PREVIEW

Gain complete access to the largest
collection of worksheets in all subjects!

Members, please
log in to
download this
worksheet.

Not a member?
Please sign up to
gain complete
access.

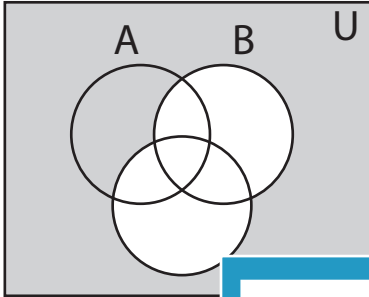
www.mathworksheets4kids.com

Answer key**Shading - Venn Diagram**

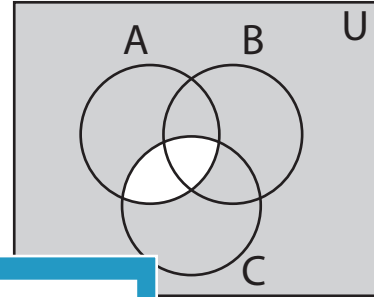
L1S1

Shade the given region.

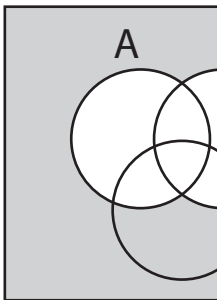
1) $(B \cup C)'$



2) $A' \cup C'$



3) $A' \cap B'$



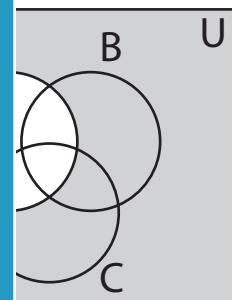
PREVIEW

Gain complete access to the largest collection of worksheets in all subjects!

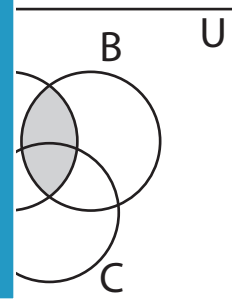
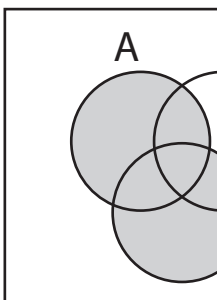
Members, please log in to download this worksheet.

Not a member? Please sign up to gain complete access.

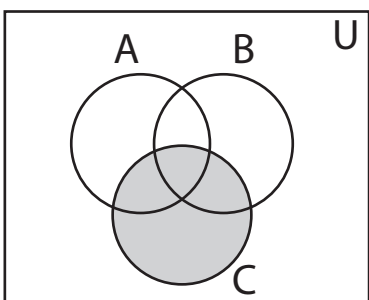
www.mathworksheets4kids.com



5) $A \cup C$



7) C



8) $A' \cup C$

